

Q.4 Which of these statements has a grammatical error?

Statement A: Shiva is unchange awareness while Shakti is his dynamic force who brings creation to life.

Statement B: Not dared even to look at each other, Harry and Ron followed Snape up the steps into the vast.

- Ans**
- 1. Both A and B
 - 2. Neither A nor B
 - 3. Only A
 - 4. Only B

Question ID : 630680220060

Chosen Option : 3

Q.5 Arrange the following districts in chronological order of highest to lowest number of proposed tourist destinations as per Telangana Socio-Economic Outlook 2021:

- A. Hyderabad**
- B. Suryapet**
- C. Nalgonda**
- D. Rangareddy**

- Ans**
- 1. A-D-C-B
 - 2. A-C-B-D
 - 3. D-C-A-B
 - 4. A-B-C-D

Question ID : 630680220022

Chosen Option : 1

Q.6 Arrange the following urban local governments in chronological order in terms of their functioning from larger area to smaller areas:

- 1. Municipal Corporation**
- 2. Notified Area Committee**
- 3. Municipality**
- 4. Town Area Committee**

- Ans**
- 1. 1, 2, 3, 4
 - 2. 1, 3, 2, 4
 - 3. 3, 2, 1, 4
 - 4. 4, 3, 2, 1

Question ID : 630680219974

Chosen Option : 2

Q.7 Six students Aman, Sohini, Ashish, Palak, Kamal and Hina are sitting around a circular table facing the centre. Sohini is sitting second to the right of Palak. Ashish and Hina are not immediate neighbours of Sohini. Palak is third to the right of Aman. Hina is sitting second to the left of Kamal. Which of the following statements are true based on the above conditions?

- A) Sohini is to the immediate right of Kamal.
- B) Hina is to the immediate right of Ashish.
- C) Aman and Palak are neighbours.

- Ans
- 1. B only
 - 2. C only
 - 3. A only
 - 4. A and B

Question ID : 630680220035
Chosen Option : 4

Q.8 In which of the following states of India has the Indian Space Research Organisation (ISRO) conducted a successful Reusable Launch Vehicle Autonomous Landing Mission (RLV LEX) at the Aeronautical Test Range (ATR)?

- Ans
- 1. Tamil Nadu
 - 2. Maharashtra
 - 3. Uttar Pradesh
 - 4. Karnataka

Question ID : 630680219933
Chosen Option : 1

Q.9 Which of the following is NOT an objective of the Fiscal Policy?

- Ans
- 1. To increase income and wealth inequalities
 - 2. To promote economic growth
 - 3. To provide employment opportunities
 - 4. To correct balance of payments deficit

Question ID : 630680219983
Chosen Option : 1

Q.10 Identify the CORRECT pair/pairs about the houses of the Parliament:

- A. Lok Sabha: House of People
- B. Rajya Sabha: Council of States

- Ans
- 1. Only A
 - 2. Both A and B
 - 3. Only B
 - 4. Neither A nor B

Question ID : 630680219970
Chosen Option : 2

Q.11 In which year was 'Mana ooru - Mana badi' programme aimed at all round development and creation of effective infrastructure in schools across the State by setting up digital classrooms launched in Telangana?

- Ans
- 1. 2020
 - 2. 2019
 - 3. 2022
 - 4. 2021

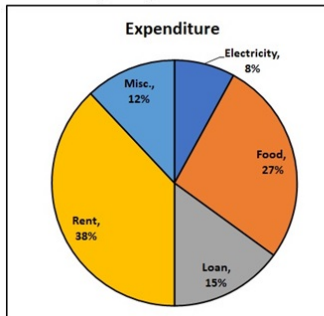
Question ID : 630680220009
Chosen Option : 4

Q.12 Which of the following is NOT an ozone depleting substance?

- Ans
- 1. Methyl iodide
 - 2. Chlorofluorocarbons
 - 3. Carbon tetrachloride
 - 4. Methyl chloroform

Question ID : 630680219950
Chosen Option : 4

Q.13 The pie chart shows the monthly expense of Mr. Sharma. Find the difference in the expenditure on food and that on loan if his monthly salary is Rs. 25000?



- Ans
- 1. Rs. 5050
 - 2. Rs. 3000
 - 3. Rs. 1400
 - 4. Rs. 7000

Question ID : 630680220054
Chosen Option : 2

Q.14 In which year did the government of India launch a New Economic Policy, which was based on LPG or Liberalisation?

- Ans
- 1. 2005
 - 2. 1950
 - 3. 2022
 - 4. 1991

Question ID : 630680219985
Chosen Option : 4

Q.15 Which Dynasty did the first ever woman ruler in the subcontinent Rudramadevi who ruled Telangana region belong to?

- Ans 1. Asaf Jahi
 2. Kakatiyas
 3. Satavahana
 4. Bahmani

Question ID : 630680220033
Chosen Option : 2

Q.16 Telangana has been ranked sixth in the country in the Sustainable Development Goals (SDG) Index India for the year 2020-2021. Rank the indicator in which the state got highest to lowest score:

- A. Clean water and sanitation
B. Affordable and clean Energy
C. Gender Equality
D. Life on Land

- Ans 1. D-A-B-C
 2. B-A-D-C
 3. A-B-C-D
 4. C-A-B-D

Question ID : 630680220015
Chosen Option : 3

Q.17 Which of a following is NOT an advantage of privatisation in the Indian Economy?

- Ans 1. Attraction to foreign investments
 2. Wasteful spending, borrowings are increased
 3. Generates more wealth leading to overall economic growth
 4. Improves government fiscal health

Question ID : 630680219986
Chosen Option : 2

Q.18 In a certain code language, 'flu kar tin' means black is good, "kar pro tis" means black and red, and "cap pro flu" means "red is beautiful", then what will be the code of "is"?

- Ans 1. kar
 2. flu
 3. tis
 4. pro

Question ID : 630680220046
Chosen Option : 2

Q.19 Read the following statements about the impact of Science and Technology on the Natural Resources:

A. Resource depletion is another negative impact of technology on the environment.

B. It refers to the consumption of a resource slower than it can be replenished.

Identify the INCORRECT statement/statements.

- Ans
- 1. Both A and B
 - 2. Neither A nor B
 - 3. Only B
 - 4. Only A

Question ID : 630680219939
Chosen Option : 1

Q.20 The first phase of the green revolution was approximately _____.

- Ans
- 1. mid 1950s upto mid 1960s
 - 2. mid 1980s upto mid 1990s
 - 3. mid 1970s upto mid 1980s
 - 4. mid 1960s upto mid 1970s

Question ID : 630680219988
Chosen Option : 3

Q.21 Match the following agrochemicals with their uses:

1. Pesticides	A. to kill weeds and herbs
2. Herbicides	B. to kill pests
3. Algaecides	C. to kill rodents
4. Rodenticides	D. to kill algae

- Ans
- 1. 1-B, 2-A, 3-D, 4-C
 - 2. 1-A, 2-B, 3-C, 4-D
 - 3. 1-A, 2-D, 3-B, 4-C
 - 4. 1-C, 2-B, 3-A, 4-D

Question ID : 630680219952
Chosen Option : 1

Q.22 Arrange the following Government Schemes in the chronological order of their enforcement:

1. Jan Dhan Yojna
2. Atal Pension Yojna
3. Gold Monetization Scheme

- Ans
- 1. 2, 1, 3
 - 2. 1, 2, 3
 - 3. 1, 3, 2
 - 4. 3, 2, 1

Question ID : 630680219984
Chosen Option : 2

Q.23 Match the rivers along with their tributaries:

1. Ganga	A. Ravi
2. Indus	B. Son
3. Yamuna	C. Bori
4. Tapti	D. Ken

- Ans
- 1. 1-C, 2-D, 3-B, 4-A
 - 2. 1-D, 2-B, 3-A, 4-C
 - 3. 1-A, 2-B, 3-C, 4-D
 - 4. 1-B, 2-A, 3-D, 4-C

Question ID : 630680219957
Chosen Option : 4

Q.24 Simran leaves her office at 15 min to six in the evening, reaches her house in 25 min, finishes her snacks in another 10 min and leaves for the market which takes another 30 min. At what time, did she leave her house to reach the market?

- Ans
- 1. 6:30 PM
 - 2. 6:00 PM
 - 3. 6:20 PM
 - 4. 7:00 PM

Question ID : 630680220039
Chosen Option : 3

Q.25 Identify the CORRECT pair of infrastructure projects at Telangana:

- Ans
- 1. Yadadri Ultra Mega Thermal Power Project - Jagtial
 - 2. Telangana Super Thermal Power Project - Adilabad
 - 3. The Solar Power Plant Telangana I - Mahbubnagar
 - 4. Singur Hydropower Project - Hanumakonda

Question ID : 630680220014
Chosen Option : 2

Q.26 Arrange the following schemes of Telangana Government in chronological order (i.e., from first to last) of their launch date:

- A. Arogya Lakshmi
- B. Kalyana Lakshmi/ Shaadi Mubarak
- C. TASK
- D. Rythu Bandhu

- Ans
- 1. D-C-B-A
 - 2. B-A-C-D
 - 3. A-B-C-D
 - 4. B-D-C-A

Question ID : 630680220012
Chosen Option : 2

Q.27 When was the Telangana statehood bill passed in both houses of Parliament?

- Ans
- 1. June 2014
 - 2. May 2014
 - 3. February 2014
 - 4. January 2014

Question ID : 630680220019
Chosen Option : 3

Q.28 As per agricultural action plan of Telangana 2016-2017 about 55.49% of state's population in Telangana is dependent on _____ for their livelihoods.

- Ans
- 1. information technology enabled services
 - 2. agriculture and allied sectors
 - 3. manufacturing and allied sectors
 - 4. transport and allied sectors

Question ID : 630680219999
Chosen Option : 2

Q.29 The question below consists of a question and two statements numbered I and II given below it. You have to decide whether the data provided in the statements are sufficient to answer the question. Read both statements and give the answer.

Question: How is N related to M?

Statement I: M is the father of O.

Statement II: O is the mother of N.

- Ans
- 1. I alone is sufficient while II alone is not sufficient
 - 2. Both I and II together are sufficient
 - 3. II alone is sufficient while I alone is not sufficient
 - 4. Neither I nor II is sufficient

Question ID : 630680220051
Chosen Option : 4

Q.30 Refer to the alphanumeric series given below and answer the following questions:

M \$ 4 9 H D & R @ 4 # U 1 & P

Find the number of symbols which are immediately preceded by an alphabet and immediately followed by a number when counting from left to right.

- Ans
- 1. 3
 - 2. 4
 - 3. 2
 - 4. 1

Question ID : 630680220042
Chosen Option : 3

Q.31 In a certain code language, 'LAVISH' is written as 'MZWHTG' and 'ACTING' is written as 'BBUHOF'.
Based on the given coding, match the following:

A. LAYOUT	1. SHHGUR
B. RIGHTS	2. MZZNVS
C. PICKLE	3. UQPNQR
D. TROOPS	4. QHDJMD

- Ans 1. A-2; B-3; C-1; D-4
 2. A-2; B-1; C-4; D-3
 3. A-3; B-1; C-4; D-2
 4. A-1; B-3; C-4; D-2

Question ID : 630680220045
Chosen Option : 2

Q.32 Who among the following was the first female astronaut to circle the moon?

- Ans 1. Kayla Barron
 2. Zena Cardman
 3. Megan McArthur
 4. Cristina Hammock Koch

Question ID : 630680219928
Chosen Option : 2

Q.33 Identify the CORRECT pair/pairs of types of crops along with the months in which they are grown:

- A. Kharif Crops: July-October
B. Rabi Crops: March- June
C. Zaid Crops: October- February

- Ans 1. Only C
 2. A, B and C
 3. Only A
 4. Both A and B

Question ID : 630680219962
Chosen Option : 3

Q.34 Fill in the blank with the most appropriate option.

He was shocked and dismayed by the sudden, _____ developments.

- Ans 1. acknowledged
 2. unforeseen
 3. forecasted
 4. budgeted

Question ID : 630680220057
Chosen Option : 2

Q.35 Daksh, Nayan, Umang, Likith and Oman are standing in a row facing north. Nayan is standing to the right of Daksh, who is standing at the one end. Oman is standing to the left of Likith, who is not standing at the end.

Which of the following statements are true based on the above conditions?

A) Oman is standing to the right of Nayan.

B) Likith is standing to the left of Umang.

Ans 1. Both A and B

2. B only

3. Neither A nor B

4. A only

Question ID : 630680220036

Chosen Option : 1

Q.36 Which of these statements has a grammatical error?

Statement A: During the accident, he was in the other car, wasn't he?

Statement B: It didn't rain last night, did it?

Ans 1. Both A and B

2. Only B

3. Neither A nor B

4. Only A

Question ID : 630680220063

Chosen Option : 3

Q.37 Which one of the following statement /statements is/are CORRECT about 'Mission Kakatiya' of Telangana Government?

A. A flagship programme of the government aimed at restoring around 46,000 tanks in five years.

B. Mission Kakatiya is aimed at reducing the power consumption by farm sector, getting higher yields, and rejuvenating rural economy on a whole

Ans 1. Only B is correct

2. Both A and B is correct

3. Only A is correct

4. Neither A nor B is correct

Question ID : 630680220010

Chosen Option : 1

Q.38 Which of the following gases is NOT a greenhouse gas?

Ans 1. Nitrous oxide

2. Carbon monoxide

3. Methane

4. Carbon dioxide

Question ID : 630680219949

Chosen Option : 1

Q.39 On 17 September 1948, the Indian government conducted a military operation called Operation _____ to bring Hyderabad state into the Indian Union.

- Ans
- 1. Vijay
 - 2. Polo
 - 3. Steeplechase
 - 4. Woodrose

Question ID : 630680220017
Chosen Option : 2

Q.40 Into how many categories are the fundamental rights of the Indian Constitution divided?

- Ans
- 1. Six
 - 2. Twelve
 - 3. Three
 - 4. Ten

Question ID : 630680219967
Chosen Option : 1

Q.41 Who among the following founded the Telangana Praja Samithi (TPS) political party in 1969 to spearhead the statehood movement?

- Ans
- 1. Sri Nerella Anjaneyulu
 - 2. Sri M. Chenna Reddy
 - 3. Sri Ponnambhakkar
 - 4. Sri Porika Naik Balaram

Question ID : 630680220018
Chosen Option : 2

Q.42 Which one of the following statement/statements is/are CORRECT about events leading to formation of Telangana?

- A. In 1969, an agitation began in Telangana region as people protested the failure to implement the Gentlemen's Agreement and other safeguards properly.
- B. The Government of India came up with eight-point plan in October 1970.
- C. On September 21, 1973, a political settlement was reached with the Centre and a 6-point formula put in place to placate people.

- Ans
- 1. Both A and C is correct
 - 2. Both A and B is correct
 - 3. Only B is correct
 - 4. Only A is correct

Question ID : 630680220027
Chosen Option : 3

Q.43 Who was the founder of Servants of India Society?

- Ans
- 1. Swami Dayanand Saraswati
 - 2. Lala Lajpat Rai
 - 3. Gopal Krishna Gokhale
 - 4. Dadabhai Naoroji

Question ID : 630680219981
Chosen Option : 1

Q.44 Which edition of the UN World Geospatial International Congress was organized in Hyderabad, India?

- Ans
- 1. Third
 - 2. Fifth
 - 3. Second
 - 4. Tenth

Question ID : 630680219925
Chosen Option : 3

Q.45 In which year was The Telangana Districts (Formation) Act was enacted?

- Ans
- 1. 1974
 - 2. 1969
 - 3. 1979
 - 4. 1970

Question ID : 630680220025
Chosen Option : 1

Q.46 Which of the following footballers recently won the Best FIFA Men's player award?

- Ans
- 1. Lionel Messi
 - 2. Xavi
 - 3. Zlatan Ibrahimovic
 - 4. Cristiano Ronaldo

Question ID : 630680219924
Chosen Option : 1

Q.47 Choose the CORRECT pair of seasons along with the months in which they occur in India:

- A. Hot weather season: March to May
- B. Retreating monsoon season: December to February
- C. Cold weather season: October to November

- Ans
- 1. Only C
 - 2. Both A and C
 - 3. A, B and C
 - 4. Only A

Question ID : 630680219954
Chosen Option : 4

Q.48 The question below consists of a question and two statements numbered I and II given below it. You have to decide whether the data provided in the statements are sufficient to answer the question. Read both statements and give the answer.

Question: If m and n are integers, what is the value of n ?

Statement I: $4m^2 = 9n^2$

Statement II: m and n both are positive.

- Ans
- 1. Neither I nor II is sufficient
 - 2. Both I and II together are sufficient
 - 3. II alone is sufficient while I alone is not sufficient
 - 4. I alone is sufficient while II alone is not sufficient

Question ID : 630680220050
Chosen Option : 4

Q.49 Arrange the following festivals in chronological order of their celebration from January to December in a year.

- A. Batukamma
- B. Bonalu
- C. Sankranti
- D. Ugadi

- Ans
- 1. A-B-C-D
 - 2. C-D-B-A
 - 3. B-A-C-D
 - 4. D-C-B-A

Question ID : 630680220008
Chosen Option : 2

Q.50 Arrange the types of courts in the order of their increasing power:

- 1. Supreme Court
- 2. District Court
- 3. High Court

- Ans
- 1. 2<3<1
 - 2. 2<1<3
 - 3. 1<2<3
 - 4. 1<3<2

Question ID : 630680219969
Chosen Option : 1

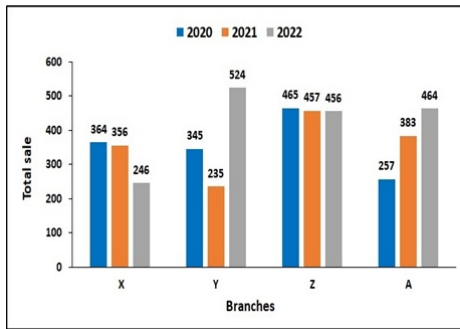
Q.51 Arrange the following states in the increasing percentage of literacy rates in India, as per the 2011 Census:

- 1. Kerala
- 2. Mizoram
- 3. Tripura
- 4. Lakshadweep

- Ans
- 1. 3<2<4<1
 - 2. 1<2<3<4
 - 3. 3<2<1<4
 - 4. 2<4<1<3

Question ID : 630680219958
Chosen Option : 1

Q.52 The bar graph shows the sale of books from four different branches X, Y, Z and A in three consecutive years. Calculate the total sale of books from branch Z.



- Ans
- 1. 1783
 - 2. 1378
 - 3. 1322
 - 4. 1432

Question ID : 630680220053
Chosen Option : 2

Q.53 Identify the CORRECT pair/pairs of states with the number of houses they possess:

- A. Bihar: Two houses
- B. Assam: Two houses
- C. Uttar Pradesh: Two houses

- Ans
- 1. Only A
 - 2. None of the above.
 - 3. Both A and C
 - 4. A, B and C

Question ID : 630680219972
Chosen Option : 1

Q.54 Read the following statements about Unemployment in India:

- A. India's population suffers from poor health and nutrition, which lowers people's ability to work and leads to unemployment.
 - B. The expansion and productive capacity of various sectors are constrained by a lack of investment and infrastructure development, which results in a poor creation of employment possibilities throughout the economy.
- Identify the INCORRECT statement/statements.

- Ans
- 1. Both A and B
 - 2. Neither A nor B
 - 3. Only A
 - 4. Only B

Question ID : 630680219961
Chosen Option : 2

Q.55 Read the following statements about the impact of Science and Technology in daily life:

A. Science and technology have facilitated human life and made us feel comfortable and enabled us to live in a modern way of life.

B. With the help of things like microwaves, fans, smartphones, and cars, science and technology have made cooking, sleeping, and communicating and transportation easier and faster.

Identify the **CORRECT** statement/statements.

- Ans**
- 1. Neither A nor B
 - 2. Only A
 - 3. Both A and B
 - 4. Only B

Question ID : 630680219937
Chosen Option : 3

Q.56 Read the following statements about the Prevention and Mitigation strategies in Disaster Management:

A. Efforts at mitigation and prevention are intended to lessen the potential harm and suffering that catastrophes may bring about.

B. Actions that can worsen a disaster's effects are particularly referred to as mitigation.

Identify the **INCORRECT** statement/statements.

- Ans**
- 1. Only A
 - 2. Neither A nor B
 - 3. Only B
 - 4. Both A and B

Question ID : 630680219945
Chosen Option : 2

Q.57 Read the following statements about the application of remote sensing in disaster management:

A. GIS is utilised at the disaster preventive stage to manage the massive amounts of data needed and for hazard assessment.

B. In the aftermath of a disaster, GIS combined with GPS is very helpful for search and rescue efforts in places that have been severely damaged and where it is challenging to get oriented.

Identify the **INCORRECT** statement/statements.

- Ans**
- 1. Neither A nor B
 - 2. Only A
 - 3. Both A and B
 - 4. Only B

Question ID : 630680219946
Chosen Option : 1

Q.58 Arrange the different religions of India in chronological order from highest to lowest in terms of population:

1. Muslim
2. Jain
3. Christian
4. Hindu

Ans 1. 2, 1, 3, 4

2. 4, 1, 3, 2

3. 3, 1, 2, 4

4. 1, 2, 3, 4

Question ID : 630680219960

Chosen Option : 2

Q.59 Which of the following is NOT a principle that serve as the foundation for laying of the policies towards the tribals?

Ans 1. Encourage in every way their traditional arts and culture.

2. Do not over-administer these areas or overwhelm them with a multiplicity of schemes.

3. Tribal rights on land and forests shall be not respected.

4. Try to train and build-up a team of their own people to do the work of administration and development.

Question ID : 630680219992

Chosen Option : 3

Q.60 Who among the following headed the five -member committee formed by Government of India to look into the statehood demand of Telangana in February 2010?

Ans 1. Justice B. Jagannadhadas

2. Justice J.L. Kapur

3. Justice Vivian Bose

4. Justice Srikrishna

Question ID : 630680219990

Chosen Option : 4

Q.61 What is the rank of India as a producer and consumer of electricity worldwide?

Ans 1. Third

2. Second

3. First

4. Fourth

Question ID : 630680219963

Chosen Option : 1

Q.62 In how many categories did the state of Telangana win National Tourism award given on the occasion of World Tourism Day celebrations held in New Delhi on September 21-2022?

- Ans 1. Three
 2. Four
 3. Five
 4. Two

Question ID : 630680220034
Chosen Option : 4

Q.63 Read the following statements about Railways in India:

A. Between Bombay (now Mumbai) and Thane over a distance of 34 km, the first rail railway line in India began operating for public traffic in 1853. It was nationalised in 1950.

B. Darjeeling, Himalayan Railways, Nilgiri Mountain Railways, Chhatrapati Shivaji Terminus, and Kalka-Shimla Railways are among the railways that UNESCO has recognised.

C. The longest run in terms of duration and mileage is the 4,273 km Vivek Express, which runs from Dibrugarh to Kanyakumari.

Identify the CORRECT statement/statements.

- Ans 1. Both A and C
 2. Only C
 3. A, B and C
 4. Only A

Question ID : 630680219964
Chosen Option : 4

Q.64 Arrange the socio religious movements in chronological order:

1. Brahma Samaj
2. Prarthana Samaj
3. Satyashodhak Samaj

- Ans 1. 2, 3, 1
 2. 3, 2, 1
 3. 1, 2, 3
 4. 1, 3, 2

Question ID : 630680219980
Chosen Option : 4

Q.65 Read the following statements about the ozone depletion in stratosphere:

A. The stratosphere, the second major layer of the atmosphere, sits above the troposphere, which is its lowest layer.

B. Ozone concentrations in the stratosphere naturally change in reaction to changes in the weather, the amount of energy the Sun releases, as well as to large volcanic eruptions.

Identify the CORRECT statement/statements.

- Ans 1. Neither A nor B
 2. Only A
 3. Only B
 4. Both A and B

Question ID : 630680219953
Chosen Option : 4

Q.66 Read the following statements about the fundamental duties:

- A. They serve as a reminder to the citizens that while enjoying their rights, they should also be conscious of duties they owe to their country, their society and to their fellow citizens.
- B. They serve as a warning against the anti-national and antisocial activities like burning the national flag, destroying public property and so on.
- C. They serve as a source of inspiration for the citizens and promote a sense of discipline and commitment among them.

Identify the CORRECT statement/statements.

- Ans
- 1. Only A
 - 2. Only C
 - 3. None of the above.
 - 4. A, B and C

Question ID : 630680219966
Chosen Option : 4

Q.67 In which country a three-day summit on "Collaboration in Sports and Physical Fitness" that brought together delegates from eight Shanghai Cooperation Organization (SCO) nations held in 2023?

- Ans
- 1. India
 - 2. Indonesia
 - 3. Japan
 - 4. China

Question ID : 630680219926
Chosen Option : 1

Q.68 Fill in the blank with the most appropriate option.

He said that the theatre's back door had _____ opened.

- Ans
- 1. bee
 - 2. beam
 - 3. bean
 - 4. been

Question ID : 630680220073
Chosen Option : 4

Q.69 The origin of the Nirmal craft of Telangana is traced back to the _____.

- Ans
- 1. Chola Era
 - 2. Pala Era
 - 3. Kakatiya Era
 - 4. Chalukya Era

Question ID : 630680220002
Chosen Option : 3

Q.70 In which district of Telangana will you find the Kadam Dam?

- Ans
- 1. Nizamabad
 - 2. Jagtial
 - 3. Adilabad
 - 4. Kamareddy

Question ID : 630680220032
Chosen Option : 1

Q.71 Which one of the following is a flagship scheme of all health initiatives of the State Government of Telangana with a mission to provide quality healthcare to the poor?

- Ans
- 1. Aarogyasri
 - 2. Nirogta
 - 3. Swasthasri
 - 4. Tandurusti

Question ID : 630680219965
Chosen Option : 1

Q.72 Which freedom fighter was popularly known as "Iron Lady"?

- Ans
- 1. Jyotiba Phule
 - 2. Aruna Asaf Ali
 - 3. Kalpana Dull
 - 4. Durgabai Deshmukh

Question ID : 630680219979
Chosen Option : 4

Q.73 Read the following statements about the impact of Science and Technology on the Environment and Society:

- A. Technology misuse and its wrong implementation leads to the occurrence of environmental pollution.
B. Scientists have proposed technology as a medium through which the environment can be sincerely helped if directed positively.
Identify the INCORRECT statement/statements.

- Ans
- 1. Only A
 - 2. Neither A nor B
 - 3. Both A and B
 - 4. Only B

Question ID : 630680219938
Chosen Option : 2

Q.74 Telangana is the Only State in entire Southern India with vast deposits of _____.

- Ans
- 1. Coal
 - 2. Crude Oil
 - 3. Hematite
 - 4. Lithium

Question ID : 630680219994
Chosen Option : 1

Q.75 Arrange the following state executives in chronological order from highest power to the least:

1. Governor
2. Council of Ministers
3. Chief Minister

- Ans
- 1. 3, 1, 2
 - 2. 2, 3, 1
 - 3. 1, 3, 2
 - 4. 1, 2, 3

Question ID : 630680219971
Chosen Option : 3

Q.76 Which of the following is NOT a major primary air pollutant?

- Ans
- 1. Silver oxide
 - 2. Nitrogen Oxides
 - 3. Sulphur oxides
 - 4. Carbon monoxide

Question ID : 630680219947
Chosen Option : 1

Q.77 Match the Policies in Telangana State in List I to the Key Features of these policies in List II:

Sl No.	List I-Policies	Sl No.	List II-Key features
A.	Telangana Excise Policy 2017-2019	i	Create a vibrant E-Waste refurbishing and recycling ecosystem.
B.	E-Waste Management Policy 2017	ii	Standardise the process of collection of certain fees from suppliers and others
C.	Telangana Electric Vehicles Policy 2020-30	iii	To make Telangana a hub for Electric Vehicles & Energy Storage Systems
D.	Telangana State Food Processing and Preservation Policy 2021	iv	Develop capacity for processing major commodities up to international standards.

- Ans
- 1. A-ii, B-iii, C-i, D-iv
 - 2. A-ii, B-i, C-iii, D-iv
 - 3. A-iii, B-i, C-ii, D-iv
 - 4. A-iv, B-i, C-iii, D-ii

Question ID : 630680220023
Chosen Option : 2

Q.78 Match the following urban governments with their functions:

1. Municipal Corporation	A. It is established for administration of smaller towns and cities
2. Municipality	B. It is created for the administration of big cities
3. Notified Area Committee	C. It is setup for the administration of a small town
4. Town Area Committee	D. It is created for fast-developing areas that have not yet achieved the numbers to become a municipality

- Ans**
- 1. 1-C, 2-B, 3-A, 4-D
 - 2. 1-A, 2-B, 3-C, 4-D
 - 3. 1-B, 2-A, 3-D, 4-C
 - 4. 1-B, 2-A, 3-C, 4-D

Question ID : 630680219973
Chosen Option : 3

Q.79 Which Goddess is worshipped in Bonalu a Hindu Festival, celebrated during the Telugu month of Ashadam?

- Ans**
- 1. Goddess Mahakali
 - 2. Goddess Saraswati
 - 3. Goddess Durga
 - 4. Goddess Lakshmi

Question ID : 630680220001
Chosen Option : 1

Q.80 Which one of the following statement/statements is/are CORRECT about Development of Telangana state after its formation in 2014?

- A. Hyderabad was ranked second among the top 20 global cities in JLL's City Momentum Index (CMI) 2019.
- B. Telangana is one of the eight states in the country that has achieved 100% electrification in households in 2020.
- C. In September 2018, the state government launched second Information Communication Technology (ICT) policy.
- D. In FY21, the Telangana State Industrial Infrastructure Corporation (TSIIC) developed 10 new industrial parks

- Ans**
- 1. Only A and D
 - 2. Only A, C and D
 - 3. Only B and C
 - 4. Only A, B and D

Question ID : 630680220021
Chosen Option : 4

Q.81 In which of the following five year plans Panchayati Raj Institutions were activated?

- Ans**
- 1. Third
 - 2. First
 - 3. Fourth
 - 4. Second

Question ID : 630680219987
Chosen Option : 3

Q.82 Government of Telangana had formulated the double bedroom housing scheme in the month of October _____ with a view to provide dignity to the poor.

- Ans
- 1. 2016
 - 2. 2015
 - 3. 2017
 - 4. 2014

Question ID : 630680220031
Chosen Option : 2

Q.83 Arrange the following types of governing authorities in terms of their power from highest to lowest:

1. Central Government
2. Zila Parishad
3. State Government

- Ans
- 1. 1>2>3
 - 2. 3>2>1
 - 3. 2>1>3
 - 4. 1>3>2

Question ID : 630680219975
Chosen Option : 4

Q.84 Which one of the following statement/statements is/are TRUE with respect to Telangana in 2021?

- A. Telangana ranked second overall in Niti Aayog's India Innovation Index 2021.
- B. It topped the performers' category.
- C. Higher education enrollments (per lakh population) in the State increased from 9.7 to 15.7.
- D. ICT labs in schools grew from 17 percent to 35 percent.

- Ans
- 1. Only C
 - 2. Only A and B
 - 3. Only B and C
 - 4. All A, B, C and D

Question ID : 630680220011
Chosen Option : 2

Q.85 Arrange the following objectives in order to reduce social exclusion and right issues in India in chronological order:

1. Conceptualize discrimination, exclusion and inclusion based on caste/ethnicity and religion.
2. Develop understanding of the nature and dynamics of discrimination and exclusion
3. Develop an understanding of discrimination at an empirical level.
4. Contextualize and problematizing discrimination, exclusion and inclusion.
5. Formulate policies for protecting the rights of these groups and eradicating the problem of exclusion and discrimination.

- Ans
- 1. 1, 2, 4, 3, 5
 - 2. 1, 2, 3, 4, 5
 - 3. 5, 4, 3, 2, 1
 - 4. 3, 1, 2, 5, 4

Question ID : 630680219991
Chosen Option : 2

Q.86 Which one of the following festival of Telangana means 'Mother Goddess come Alive', and is celebrated towards the end of monsoon and heralds the abundance that nature has to offer?

- Ans 1. Bathukamma
 2. Attukal Pongala
 3. Vishu
 4. Adoor Gajamela

Question ID : 630680220000
Chosen Option : 1

Q.87 Four words are given, out of which only one word is spelt correct. Choose the correctly spelt word.

- Ans 1. FLOURESCENT
 2. EMBARRASS
 3. GAUGE
 4. HYGEINE

Question ID : 630680220070
Chosen Option : 3

Q.88 Identify the INCORRECT pair/pairs of events and their year of enactment:

- A. Resolution of 'Poorna Swaraj' passed: 1929
B. Gandhi-Irwin Pact: 1932
C. Government of India Act passed: 1935

- Ans 1. Only B
 2. Both A and B
 3. A, B and C
 4. Only A

Question ID : 630680219977
Chosen Option : 4

Q.89 Read the following statements about Biochemistry:

- A. Biology's discipline of biochemistry focuses on the chemical processes occurring inside living things.
B. Biochemistry is the study of the vital chemical processes that have supported the development of the astonishing diversity of life that exists today on Earth.
C. The "molecules of life" are four subgroups of molecules that make up all life.
Identify the CORRECT statement/statements.

- Ans 1. A, B and C
 2. Both A and B
 3. Only A
 4. Both A and C

Question ID : 630680219942
Chosen Option : 1

Q.90 Match the following natural resources with their products/services:

1. Trees	A. Fuel
2. Cotton	B. Paper
3. Coal	C. Clothing
4. Diamonds	D. Jewellery

- Ans 1. 1-B, 2-A, 3-C, 4-D
 2. 1-A, 2-B, 3-C, 4-D
 3. 1-C, 2-B, 3-A, 4-D
 4. 1-B, 2-C, 3-A, 4-D

Question ID : 630680219955
Chosen Option : 4

Q.91 Arrange the given words in the sequence in which they occur in the dictionary.

1. Present
2. Promotion
3. Practical
4. Practice
5. Prestige

- Ans 1. 43152
 2. 43215
 3. 34152
 4. 34215

Question ID : 630680220037
Chosen Option : 3

Q.92 Read the following statements about Deforestation:

- A. The deliberate clearance of forested terrain is known as deforestation.
 - B. To make room for agriculture, animal grazing, and to obtain wood for building, manufacture, and fuel, forests have been cleared.
 - C. Around the world, deforestation has significantly changed the terrain.
- Identify the CORRECT statement/statements.

- Ans 1. Only C
 2. Both A and C
 3. Both A and B
 4. A, B and C

Question ID : 630680219951
Chosen Option : 2

Q.93 Match the following Acts with their year of enactment:

1. Indian Universities Act	A. 1913
2. Wardha Scheme	B. 1904
3. Government resolution on education policy	C. 1937

- Ans
- 1. 1-A, 2-B, 3-C
 - 2. 1-B, 2-C, 3-A
 - 3. 1-A, 2-C, 3-B
 - 4. 1-C, 2-B, 3-A

Question ID : 630680219976
Chosen Option : 2

Q.94 Which day is celebrated as 'Telangana Language Day' each year?

- Ans
- 1. 10th November
 - 2. 9th September
 - 3. 14th October
 - 4. 15th August

Question ID : 630680220003
Chosen Option : 2

Q.95 Arrange the following mountain peaks of the Himalayas in increasing order of their altitudes:

1. Mt. Everest
2. Kanchenjunga
3. Makalu
4. Dhaulagiri

- Ans
- 1. 1<2<3<4
 - 2. 3<2<4<1
 - 3. 3<1<2<4
 - 4. 4<3<2<1

Question ID : 630680219956
Chosen Option : 4

Q.96 Identify the CORRECT statement/statements about swachh Auto Tippers Driver cum owner scheme of Telangana Government:

- A. Under this scheme, the Auto Tippers will be branded as 'swachh Auto Tippers' with uniform color coding and branding.
- B. Each such eligible beneficiary identified shall make an 10-20% of upfront cost of the on-road vehicle cost.
- C. Each Swachh Auto Tipper will be allotted an area covering 650-750 households with route numbers identified by the ULB for providing the service.

- Ans
- 1. Only A and C are correct
 - 2. Only A and B are correct
 - 3. Only B and C are correct
 - 4. A, B and C are Correct

Question ID : 630680220029
Chosen Option : 2

Q.97 Which one of the following statement/statements is /are CORRECT about heritage sites of Telangana?

- A. Golconda Fort was originally known as Mankal and built on a hilltop in the year 1143.
B. Khammam fort was constructed in the 950s AD by the glorious Kakatiya rulers Later Velama and Musunuri Nayak kings were also involved in its construction.

- Ans 1. Both A and B are Correct
 2. Only A is correct
 3. Only B is correct
 4. Neither A nor B are correct

Question ID : 630680220004
Chosen Option : 1

Q.98 In the question, a statement is given, followed by two conclusions, I and II. You have to consider the statement to be true even if it seems to be at variance from commonly known facts. You have to decide which of the given conclusions, if any, follows from the given statement.

- Statement: Akash is the best cricketer in his colony.
Conclusion I: No other cricketer in the colony is as good as Akash.
Conclusion II: Akash plays only cricket.

- Ans 1. Only II follows
 2. Neither I nor II follows
 3. Both I and II follows
 4. Only I follows

Question ID : 630680220052
Chosen Option : 4

Q.99 Which one of the following statement/statements is/are TRUE about the First Assembly Election of Telangana State?

- A. Telangana Rashtra Samithi emerged victorious by winning 63 of the 119 seats and formed the government.
B. Sri K Chandrashekar Rao was sworn in as the First Chief Minister of Telangana.

- Ans 1. Only B is true
 2. Only A is true
 3. Neither A nor B are True
 4. Both A and B are True

Question ID : 630680220020
Chosen Option : 4

Q.100 Which one of the following statement/statements is/are CORRECT about traditional art forms of Telangana?

- A. Kakatiya rule led to evolution of dance forms such as Perini Sivatandavam.
B. 'Dhoom Dham' is one such evolved and composite art form.
C. A variant of Bharatnatyam, Chindu Bhagavatham is performed widely across Telangana.

- Ans 1. Only B and C is correct
 2. Only C is correct
 3. Only A and B is correct
 4. Only B is correct

Question ID : 630680220028
Chosen Option : 3

Q.101 Which of the following countries will host Asian Cup Football Tournament 2027?

- Ans 1. Qatar
 2. Saudi Arabia
 3. China
 4. Japan

Question ID : 630680219929
Chosen Option : 2

Q.102 Arrange the following events in chronological order (i.e., from first to last) of their happening:

- A. Burgula Ramakrishna Rao was elected Chief Minister of Hyderabad state.
B. Central government appointed a civil servant, M K Vellodi Chief Minister of Hyderabad state.
C. A "Gentlemen's Agreement" was then signed by Bezawada Gopala Reddy and Burgula Ramakrishna Rao to the effect.
D. Government Order to safeguard the interests of Telangana people in government employment.

- Ans 1. C-D-B-A
 2. D-B-C-A
 3. B-A-C-D
 4. A-B-C-D

Question ID : 630680220026
Chosen Option : 3

Q.103 Match the Agricultural Schemes in List -I with their Key Features in List -II:

Sl No.	List I-Agricultural scheme	Sl No.	List II-Key features
A.	Rythu Bandhu Scheme (AISS)	i	To conserve natural resources;
B.	Soil Health Card Scheme (SHC)	ii	Strengthen Research-Extension-farmer (REF) Linkages.
C.	Rastriya Krishi Vikas Yojana (RKVY)	iii	Grant @ Rs.5000/
D.	Agriculture Technology Management Agency (ATMA)	iv	To maximize returns to the farmers

- Ans 1. A-i, B-iii, C-iv, D-ii
 2. A-iii, B-iv, C-i, D-ii
 3. A-iii, B-i, C-ii, D-iv
 4. A-iii, B-i, C-iv, D-ii

Question ID : 630680220013
Chosen Option : 4

Q.104 In which part of the Indian Constitution is Citizenship incorporated?

- Ans 1. Part I
 2. Part III
 3. Part II
 4. Part IV

Question ID : 630680219968
Chosen Option : 3

Q.105 Identify the CORRECT Pair of literary work and author from Telangana:

- Ans 1. Sivayogasaramu - Kolanu Ganapatideva
 2. Nitisastramukthavali - Vidyanadha
 3. Nrittaratnavali - Gona Budha Reddy
 4. Prataparudriyam - Baddena

Question ID : 630680220007
Chosen Option : 3

Q.106 Which of these statements has a grammatical error?

Statement A: India was therefore taken by completely surprise politically, diplomatically and strategically.

Statement B: The two Guna soldiers who have succumbed to their injuries, will be honoured as clan heroes.

- Ans 1. Only A
 2. Both A and B
 3. Only B
 4. Neither A nor B

Question ID : 630680220059
Chosen Option : 1

Q.107 What percentage of ocean pollution originates on land?

- Ans 1. 5%
 2. 0.5%
 3. 80%
 4. 30%

Question ID : 630680219948
Chosen Option : 1

Q.108 In the rural areas of which of the borders of India has the Vibrant Villages Programme launched?

- Ans 1. Eastern borders
 2. Western borders
 3. Southern borders
 4. Northern borders

Question ID : 630680219935
Chosen Option : 1

Q.109 Which of the following types of Ecology looks at the smallest fundamental levels of life, that is, the cellular level?

- Ans 1. Behavioural Ecology
 2. Microbial Ecology
 3. Ecosystem Ecology
 4. Community Ecology

Question ID : 630680219943
Chosen Option : 2

Q.110 Read the following about Anatomy and Physiology:

A. Anatomy and physiology is the study of the body's systems and structures and how they interact.

B. Anatomy focuses on the physical arrangement of parts in the body, while physiology studies the inner functioning of cells, tissues, and organs.

Identify the CORRECT statement/statements.

- Ans
- 1. Only B
 - 2. Both A and B
 - 3. Neither A nor B
 - 4. Only A

Question ID : 630680219941

Chosen Option : 2

Q.111 Marks of seven students P, Q, R, S, T, U and V in a test were given as follows, P's score was exactly in between T's and U's scores. Q's score was only more than V's score and R's score was immediately more than Q's score. U's score was more than T's score whose score is more than R's score. U did not score the highest.

Which of the following statements are true based on the above conditions?

A) S scored the highest.

B) V scored the least.

- Ans
- 1. Both A and B
 - 2. B only
 - 3. A only
 - 4. Neither A nor B

Question ID : 630680220044

Chosen Option : 1

Q.112 Which of the following ministries launched the Nasha Mukta Bharat Abhiyaan (NMBA)?

- Ans
- 1. Ministry of Housing and Urban Affairs
 - 2. Ministry of Education
 - 3. Ministry of Social Justice & Empowerment
 - 4. Ministry of Information and Broadcasting

Question ID : 630680219934

Chosen Option : 3

Q.113 Among seven friends Ankit, Binod, Chaman, Darshan, Eshwar, Harshit and Gaurav; Binod is taller than four of his friends. Chaman is taller than Darshan. Ankit is taller than Harshit. Eshwar is only taller than Gaurav, who is the shortest among all his friends. Binod is taller than Ankit. Which of the following statements are true based on the above conditions?

A) Chaman is not the tallest.

B) Eshwar is the tallest.

C) Ankit is taller than Gaurav.

- Ans
- 1. C only
 - 2. A and B
 - 3. A only
 - 4. B and C

Question ID : 630680220043

Chosen Option : 2

Q.114 Which one of the following statement/statements is/are TRUE about the Forest vegetation of Telangana State?

- A. The Geographical area of Telangana State has 33% of notified forest area as on March 2023.
- B. Dry Teak Forest and Southern Dry Mixed Deciduous Forest are two major types of forests that Telangana has.
- C. Amrabad Tiger Reserve and the Kawal Tiger Reserve are notified as two Tiger reserves in the state.
- D. Ranga Reddy has the lowest of 758.87 Km² notified forest area in the State.

- Ans
- 1. Only A
 - 2. Only B, C and D
 - 3. Only A and D
 - 4. Only A and B

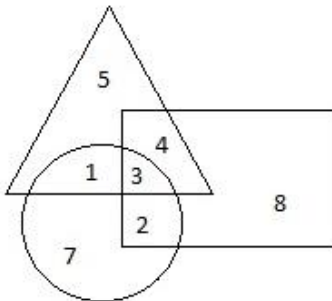
Question ID : 630680219997
Chosen Option : 2

Q.115 Which of the following leaders was the founder of the organisation Gyan Prasarak Mandali?

- Ans
- 1. Lala Lajpat Rai
 - 2. Gopal Krishna Gokhale
 - 3. Dadabhai Naoroji
 - 4. Swami Dayanand Saraswati

Question ID : 630680219978
Chosen Option : 2

Q.116 Find the number common to all three figures.



- Ans
- 1. 4
 - 2. 3
 - 3. 1
 - 4. 2

Question ID : 630680220041
Chosen Option : 2

Q.117 Fill in the blank with the most appropriate option.

I heard he owns a Ferrari as well, _____?

- Ans
- 1. isn't he
 - 2. doesn't he
 - 3. has he
 - 4. is he

Question ID : 630680220064
Chosen Option : 1

Q.118 Arrange the following in chronological order:

- A. My mother asked me to bring the newspaper from the verandah.
- B. It was a bright sunny morning.
- C. I was mesmerised and I got lost staring at the bird.
- D. I went out and saw a beautiful blue bird.
- E. Fifteen minutes later, mother screamed from inside, as I had forgotten the newspaper.

- Ans
- 1. DCAEB
 - 2. DCBEA
 - 3. BADCE
 - 4. EACBD

Question ID : 630680220061
Chosen Option : 3

Q.119 which one of the following pair/pairs is /are TRUE about state symbols of Telangana?

- A. The State Bird - Varaiyaadu (Common Emerald Dove).
- B. The State Animal - Jinka (Deer).
- C. The State Tree - Jammi Chettu (Prosopis Cineraria).
- D. The State Flower - Kopou Phool (Foxtail Orchid).

- Ans
- 1. Only And B
 - 2. Only B and C
 - 3. Only A and D
 - 4. Only C and D

Question ID : 630680220005
Chosen Option : 2

Q.120 In 2020-21, Telangana was the _____ highest contributor to the country's GDP at both current prices and constant prices.

- Ans
- 1. Ninth
 - 2. Sixth
 - 3. Fourth
 - 4. Third

Question ID : 630680219998
Chosen Option : 2

Q.121 Fill in the blank with the most appropriate option.

In one epic battle, Shakti faces _____ invincible asura, Raktabija.

- Ans
- 1. a
 - 2. one
 - 3. the
 - 4. No word required

Question ID : 630680220055
Chosen Option : 4

Q.122 From the options chose the correct active voice form for the sentence given below.

An informal poll was taken by the student council.

- Ans
- 1. Council by students took an informal poll.
 - 2. The student council took an informal poll.
 - 3. Informal poll was been taken by students council.
 - 4. Poll which was informal was taken by council of students.

Question ID : 630680220065
Chosen Option : 2

Q.123 In how many Teacher Educational Institutions (TEIs) has launched the Integrated Teacher Education Programme (ITEP) from the academic session 2023-24 throughout the country?

- Ans
- 1. 12
 - 2. 57
 - 3. 2
 - 4. 100

Question ID : 630680219932
Chosen Option : 1

Q.124 Fill in the blank with the most appropriate option.

With a roar, the fire turned emerald green and _____ higher than Fred.

- Ans
- 1. rows
 - 2. raised
 - 3. rose
 - 4. arose

Question ID : 630680220072
Chosen Option : 2

Q.125 In how many states will the PM Mitra Parks be established?

- Ans
- 1. 10
 - 2. 7
 - 3. 8
 - 4. 2

Question ID : 630680219931
Chosen Option : 2

Q.126 Who among the following was one of the founders of the Theosophical Society?

- Ans
- 1. Lala Lajpat Rai
 - 2. Gopal Krishna Gokhale
 - 3. Dadabhai Naoroji
 - 4. Madame H. P. Blavatsky

Question ID : 630680219982
Chosen Option : 4

Q.127 Fill in the blank with the most appropriate option.

He predicted that India would have to pay dearly for failure to act _____. China becomes stronger.

- Ans
- 1. amidst
 - 2. against
 - 3. before
 - 4. during

Question ID : 630680220058
Chosen Option : 1

Q.128 Which one of the following statement/statements is/are CORRECT?

- A. Telangana has 2 main rivers Godavari and Krishna.
- B. Both the rivers flow from East to West.

- Ans
- 1. Neither A nor B are correct
 - 2. Both A and B are correct
 - 3. Only A is correct
 - 4. Only B is correct

Question ID : 630680219996
Chosen Option : 3

Q.129 Match the following words with their respective antonym.

A. Action	1. Ignorance
B. Resentful	2. Helping
C. Experience	3. Thoughts
D. Words	4. Lethargy

- Ans
- 1. A-1, B-2, C-4, D-3
 - 2. A-3, B-1, C-2, D-4
 - 3. A-2, B-3, C-4, D-1
 - 4. A-4, B-2, C-1, D-3

Question ID : 630680220068
Chosen Option : 3

Q.130 Consider the following pairs:

- A. Wimp : Coward
- B. Dreamy : Real
- C. Camouflage : Cloak
- D. Shade : Shadow

Choose the correct pair of synonyms.

- Ans
- 1. A, B, C & D
 - 2. A & D only
 - 3. A, C & D only
 - 4. A & C only

Question ID : 630680220069
Chosen Option : 2

Q.131 What percentage range of the total differently abled persons constitutes of Women in India as per Census 2011?

- Ans
- 1. 40-50
 - 2. 1-10
 - 3. 90-100
 - 4. 10-20

Question ID : 630680219993
Chosen Option : 4

Q.132 Identify the CORRECT pair of information about educational Institution on Telangana and Year of establishment among the given alternative.

- Ans
- 1. Sri P.V. Narsimha Rao Telangana Veterinary University-2021
 - 2. Sri Konda Laxman Telangana State Horticultural University-2020
 - 3. Professor Jayashankar Telangana State Agricultural University (Formerly Acharya N.G Ranga Agricultural University)-2019
 - 4. Kaloji Narayan Rao University of Health Sciences-2015

Question ID : 630680220024
Chosen Option : 1

Q.133 Imran and Reshma are a couple. Imran recalls that their anniversary is after the fifteenth but before the eighteenth of March, but Reshma recalls that their anniversary is after the sixteenth but before the nineteenth. What date in March do they celebrate their anniversary?

- Ans
- 1. 16th
 - 2. 18th
 - 3. 17th
 - 4. 19th

Question ID : 630680220038
Chosen Option : 3

Q.134 Read the following statements about Kitchen chemistry:

A. Kitchen chemistry involves using everyday items that you can find in your kitchen or local discount store to explore basic chemistry.

B. Chemical changes occur when the atoms in a substance are rearranged in order to make a new substance.

C. Physical changes occur without changing the molecular composition of a substance.

Identify the INCORRECT statement/statements.

- Ans
- 1. Only A
 - 2. Both A and B
 - 3. A, B and C
 - 4. None of the above.

Question ID : 630680219944
Chosen Option : 1

Q.135 Select the most appropriate meaning of the given idiom.

Great minds think alike

- Ans
- 1. Beginning is hardest
 - 2. To have similar people around
 - 3. Everyone has their own ideas
 - 4. Smart people usually have same ideas

Question ID : 630680220067
Chosen Option : 3

Q.136 Read the given statements and conclusions carefully. Assuming that the information given in the statements is true, even if it appears to be at variance with commonly known facts, decide which of the given conclusions logically follow(s) from the statements.

Statement I: All books are markers.

Statement II: All markers are pens.

Conclusion I: All books are pens.

Conclusion II: All pens are books.

- Ans
- 1. Neither conclusion I nor II follows
 - 2. Both conclusion I and II follows
 - 3. Only conclusion I follows
 - 4. Only conclusion II follows

Question ID : 630680220040
Chosen Option : 4

Q.137 Identify the CORRECT pair/pairs of the percentages below poverty line in 2011-2012, as per

NITI AAYOG:

A. Rural areas: 25.7%

B. Urban areas: 13.7%

- Ans
- 1. Only A
 - 2. Neither A nor B
 - 3. Both A and B
 - 4. Only B

Question ID : 630680219959
Chosen Option : 3

Q.138 Select the option that is related to the fifth letter-cluster in the same way as the second letter-cluster is related to the first letter-cluster and the fourth letter-cluster is related to the third letter-cluster.

YXW72 : BAZ29 :: EDC12 : HGF21 :: KJI30 : ?

- Ans 1. NML39
 2. LMN29
 3. NMO39
 4. MON40

Question ID : 630680220048
Chosen Option : 1

Q.139 Four words are given, out of which three words are spelt correctly. Choose the incorrectly spelt word.

- Ans 1. COLLEAGUE
 2. AMATEUR
 3. DEFINATELY
 4. COMPARISON

Question ID : 630680220071
Chosen Option : 2

Q.140 Which of the following countries will be removed from the United Nation's list of Least Developed Countries (LDCs)?

- Ans 1. South Sudan
 2. Bangladesh
 3. Myanmar
 4. Bhutan

Question ID : 630680219927
Chosen Option : 2

Q.141 Which disease is the Telangana government's pioneering initiative 'KCR Nutrition Kits' aimed at reducing?

- Ans 1. Obesity
 2. Heart Disease
 3. Type 2 Diabetes
 4. Anemia

Question ID : 630680220016
Chosen Option : 4

Q.142 Which of the following types of organisms DO NOT belong to the kingdom Monera?

- Ans 1. Bacteria
 2. Sponges
 3. Cyanobacteria
 4. Spirochetes

Question ID : 630680219940
Chosen Option : 1

Q.143 Match the Heritage sites in List I to the location in List II:

Sl No.	List I-Heritage	Sl No.	List II-Location
A.	Chowmahalla Palace	i	Yadadri Bhuvanagiri
B.	Bhuvanagiri Fort	ii	Karimnagar
C.	Elgandla Fort	iii	Warrangal
D.	Ramappa Temple	iv	Hyderabad

- Ans 1. A-iv, B-i, C-ii, D-iii
 2. A-iv, B-ii, C-i, D-iii
 3. A-iii, B-i, C-ii, D-iv
 4. A-i, B-iv, C-ii, D-iii

Question ID : 630680220006
Chosen Option : 1

Q.144 Fill in the blank with the most appropriate option.

This leads to _____ exhausting life of trying to satisfy them all.

- Ans 1. one
 2. a
 3. an
 4. the

Question ID : 630680220056
Chosen Option : 3

Q.145 Ashish walks 5 km toward the South and then walks 3 km to his left. Finally, he turns to his right and walks 8 km. In which direction is he from the starting point?

- Ans 1. South
 2. East
 3. South-east
 4. South-west

Question ID : 630680220047
Chosen Option : 1

Q.146 Which of the following is NOT a benefit of Green Revolution in India?

- Ans 1. Industry growth
 2. Less dependency on imports
 3. Increase in farmers' earnings
 4. Decrease in food grain production

Question ID : 630680219989
Chosen Option : 4

Q.147 Consider the following pairs and choose the pair which matches the given relation.

Country : Capital

- A. Australia: Venice
- B. Pakistan: Islamabad
- C. China: Taiwan
- D. Indonesia: Jakarta

Ans 1. A, B and D

2. A only

3. B and D

4. B only

Question ID : 630680220049

Chosen Option : 3

Q.148 Which of these statements has a grammatical error?

Statement A: I suppose she chosen me because she knew my name.

Statement B: We find that in Hindu mythology Prakriti and Purusha or Shiva and Shakti are always find together.

Ans 1. Only B

2. Both A and B

3. Neither A nor B

4. Only A

Question ID : 630680220062

Chosen Option : 2

Q.149 What is the literacy rate of Telangana as on February 2023?

Ans 1. 57.86%

2. 50.23%

3. 70.12%

4. 66.54%

Question ID : 630680219995

Chosen Option : 3

Q.150 How many states of India are most vulnerable to climate risks as per a report on "Gross Domestic Climate Risk"?

Ans 1. 19

2. 20

3. 9

4. 2

Question ID : 630680219936

Chosen Option : 1