



Telangana State Public Service Commission

Candidate ID	
Candidate Name	
Tests Center Name	
Test Date	08/05/2023
Test Time	10:00 AM - 12:30 PM
Subject	PC22121 GENERAL STUDIES AND GENERAL ABILITIES AEE2212

Q.1 Match the given idioms with their correct meanings.

Idiom		Meaning	
A	Raining cats and dogs	1	Make a fresh start
B	Spill the beans	2	Very dark
C	Turn over a new leaf	3	Rain heavily
D	Pitch black	4	Reveal a secret

- Ans
- ✓ 1. A-3, B-4, C-1, D-2
 - ✗ 2. A-3, B-1, C-2, D-4
 - ✗ 3. A-1, B-4, C-2, D-3
 - ✗ 4. A-4, B-3, C-1, D-2

Question ID : 630680218556
Chosen Option : 1

Q.2 Identify the sentence with the correct usage of the future continuous tense.

I. I will be making all the arrangements for this upcoming trip.

II. She might had been closing the door immediately.

- Ans
- 1. Neither I nor II
 - 2. Only II
 - 3. Both I and II
 - 4. Only I

Question ID : 630680218550
Chosen Option : 4

Q.3 Varishtha Pension Bima Yojana is under which Union ministry?

- Ans
- 1. Ministry of Home Affairs
 - 2. Ministry of Social Justice and Empowerment
 - 3. Ministry of Finance
 - 4. Ministry of Health and Family Welfare

Question ID : 630680218485
Chosen Option : 1

Q.4 Consider the following and select the correct statement(s):

A: The merger of the Telangana government's Aarogyasri Health Scheme and Centre's Ayushman Bharat Scheme has increased the maximum health protection to ₹5 lakhs per year.

B: The upper limit under the Aarogyasri scheme was ₹2 lakh per year before merging with Ayushman Bharat Scheme.

C: Aarogyasri scheme includes 15 Organ Transplantation Surgeries.

- Ans
- 1. A and C only
 - 2. Only B
 - 3. Both A and B
 - 4. A, B and C

Question ID : 630680218515
Chosen Option : 4

Q.5 Which of the following statements is correct?

I. In 1801, a subsidiary alliance was imposed on Mysore.

II. Nana Saheb was the adopted son of Peshwa Baji Rao II

Ans 1. Only II

2. Neither I nor II

3. Only I

4. Both I and II

Question ID : 630680218471
Chosen Option : 4

Q.6 What is the correct order (first to last) of the following Indian regions with respect to the expected arrival of advancing monsoon?

Ans 1. Thiruvananthapuram, Ahmedabad, Mumbai

2. Mumbai, Ahmedabad, Thiruvananthapuram

3. Thiruvananthapuram, Mumbai, Ahmedabad

4. Ahmedabad, Mumbai, Thiruvananthapuram

Question ID : 630680218446
Chosen Option : 3

Q.7 In which year M Chenna Reddy, founded the Telangana Praja Samithi (TPS) political party to spearhead the statehood movement?

Ans 1. 1973

2. 1971

3. 1969

4. 1975

Question ID : 630680218521
Chosen Option : 3

Q.8 Match the following power projects and their respective location/district:

Power project	Location/district
A. Nagarjunasagar Hydroelectric project	1. Nizamabad
B. Pochampad Hydroelectric Project	2. Nalgonda
C. Singoor Hydroelectric Project	3. Mahabubnagar
D. Srisaillam Hydroelectric Project	4. Sangareddy

- Ans
- ✓ 1. A-2, B-1, C-4, D-3
 - ✗ 2. A-2, B-1, C-3, D-4
 - ✗ 3. A-1, B-2, C-4, D-3
 - ✗ 4. A-4, B-1, C-2, D-3

Question ID : 630680218497
Chosen Option : 1

Q.9 In September 2022, the Centre government of India has set a new target of a 40% reduction in particulate matter concentration in cities covered under the National Clean Air Programme (NCAP) by _____.

- Ans
- ✓ 1. 2026
 - ✗ 2. 2028
 - ✗ 3. 2024
 - ✗ 4. 2030

Question ID : 630680218442
Chosen Option : 3

Q.10 The Montreal Protocol was based on _____.

- Ans
- ✗ 1. nuclear proliferation
 - ✗ 2. artificial afforestation in cities
 - ✓ 3. ozone layer depletion
 - ✗ 4. protection of critical endangered species

Question ID : 630680218439
Chosen Option : 3

Q.11 Select the correct passive form of the given sentence.

My team has analysed the project.

- Ans
- 1. By my team the project is analyzed.
 - 2. The project was analyzed by my team.
 - 3. The project is beenanalyzed by my team.
 - 4. The project has been analyzed by my team.

Question ID : 630680218553
Chosen Option : 2

Q.12 Select the most appropriate option to fill in the blank.

The nature of _____ bird is to fly in _____ open sky.

- Ans
- 1. an, an
 - 2. the, an
 - 3. a, the
 - 4. an, the

Question ID : 630680218544
Chosen Option : 3

Q.13 In the following question below are given three statements followed by some conclusions based on those statements. Taking the given statements to be true even if they seem to be at variance from commonly known facts. Read all the conclusions and then decide which of the given conclusions logically follows the given statements.

Statements:

- I. All N are Q.
- II. Some Q are P.
- III. No P is R.

Conclusions:

- I. Some Q are R.
- II. Some N are R.
- III. All Q are N.

- Ans
- 1. No conclusion follows
 - 2. Only III conclusion follows
 - 3. Only II conclusion follows
 - 4. Only I conclusion follows

Question ID : 630680218528
Chosen Option : 1

Q.14 What is the theme of the World Environment Day 2023?

- Ans
- 1. Many Species, One Planet, One Future
 - 2. Ecosystem Restoration
 - 3. Solutions to Plastic Pollution
 - 4. Connecting People to Nature

Question ID : 630680218414
Chosen Option : 1

Q.15 In the 2009 general elections, how many Lok Sabha seats did Telangana Rashtra Samithi (TRS) win?

- Ans
- 1. 2
 - 2. 8
 - 3. 4
 - 4. 6

Question ID : 630680218522
Chosen Option : 4

Q.16 Match the following seasons in India and their period.

	Season		Period
I	Retreating Monsoons	1	Mid-November to February
II	Cold Weather Season	2	October-November
III	Hot Weather Season	3	March to May

- Ans
- 1. I-1, II-2, III-3
 - 2. I-2, II-1, III-3
 - 3. I-2, II-3, III-1
 - 4. I-3, II-2, III-1

Question ID : 630680218448
Chosen Option : 2

Q.17 In October 2022, who became the prime minister of the United Kingdom by replacing Liz Truss?

- Ans**
- 1. Kemi Badenoch
 - 2. Penny Mordaunt
 - 3. Rishi Sunak
 - 4. Boris Johnson

Question ID : **630680218413**
Chosen Option : **3**

Q.18 Arrange the following national parks in India based on their location from north to south.

- I. Bandipur National Park
- II. Simlipal National Park
- III. Manas National Park

- Ans**
- 1. I, II, III
 - 2. III, II, I
 - 3. I, III, II
 - 4. III, I, II

Question ID : **630680218447**
Chosen Option : **2**

Q.19 In a certain coding language 'PRAYINGS' is coded as 'YARPSGNI'. Which of the following pair of Word : Code is correct on basis of the above code language?

- Ans**
- 1. SEWINGLY : YLGNIWES
 - 2. SPININGS : PSNINISG
 - 3. WATCHILY : TAWCHYLI
 - 4. CORRECTY : RROCYTCE

Question ID : **630680218534**
Chosen Option : **1**

Q.20 Arrange the following in chronological order (commissioned year):

- A. Nagarjunasagar Hydroelectric Project
- B. Singur Hydroelectric Project
- C. Srisaillam Hydroelectric Project.
- D. Pochampad Hydroelectric Project

- Ans
- 1. A, C, D, B
 - 2. A, D, B, C
 - 3. B, D, C, A
 - 4. D, A, C, B

Question ID : 630680218513
Chosen Option : 1

Q.21 The Ministry of Social Justice and Empowerment has launched an scheme called the SMILE scheme for _____.

- Ans
- 1. Old age home of elderly
 - 2. Free higher education for economically weaker sections
 - 3. Free gas connection to women
 - 4. Support for Marginalized Individuals for Livelihood and Enterprise

Question ID : 630680218486
Chosen Option : 1

Q.22 In a certain coding language 'COLOR' is coded as 'AMJMP'. Match the following words with their respective codes on basis of the above given code language?

	Word		Code
I	SLEPT	1	QJCNR
II	CRUSH	2	APSQF
III	PUNCH	3	NSLAF

- Ans
- 1. I-2, II-3, III-1
 - 2. I-1, II-3, III-2
 - 3. I-2, II-1, III-3
 - 4. I-1, II-2, III-3

Question ID : 630680218533
Chosen Option : 4

Q.23 Perini Shivatandavam is a war dance originated during the _____ century when Kakatiya dynasty was in supreme power reigning across Telangana state.

- Ans**
- 1. 10th
 - 2. 12th
 - 3. 11th
 - 4. 13th

Question ID : 630680218506
Chosen Option : 3

Q.24 Consider the following array of special characters and digits.

#9@36^7\$4@3!2*68

How many special characters are followed by an odd number and preceded by an even number?

- Ans**
- 1. 3
 - 2. 2
 - 3. 1
 - 4. 4

Question ID : 630680218530
Chosen Option : 3

Q.25 Select the most appropriate option to fill in the blank.

Misappropriation or conversion need not be permanent; it may be for _____.

- Ans**
- 1. a times
 - 2. the time
 - 3. an time
 - 4. a time

Question ID : 630680218543
Chosen Option : 1

Q.26 The table given below shows the number of cars sold by 5 showrooms in 3 consecutive years.

	Y1	Y2	Y3
S1	460	340	510
S2	860	440	220
S3	630	430	470
S4	230	290	840
S5	340	360	480

Which of the following is the correct order of total sales of showrooms in the given 3 years together?

- Ans** 1. $S3 > S2 > S4 > S1 > S5$
 2. $S2 > S3 > S4 > S1 > S5$
 3. $S3 > S2 > S1 > S4 > S5$
 4. $S2 > S3 > S1 > S4 > S5$

Question ID : 630680218541
Chosen Option : 1

Q.27 With respect to environmental issues, which practice is refers to misleading and exaggerated claims to deceive people about the environmental worthiness of a product or action?

- Ans** 1. Greenwashing
 2. Ecowasher
 3. Fake greening
 4. Window greening

Question ID : 630680218441
Chosen Option : 4

Q.28 The Price of six pens A, B, J, L, M and T is compared. No two pens have the same price. Price of L is more than only A, B and J. Price of T is maximum and price of A is least. Which pen has the second highest price?

- Ans** 1. J
 2. T
 3. L
 4. M

Question ID : 630680218531
Chosen Option : 4

Q.29 Select the most appropriate option to fill in the blank.

Your teachers have denied admission to the school, _____?

- Ans
- 1. has they
 - 2. did they
 - 3. haven't they
 - 4. hadn't them

Question ID : 630680218552
Chosen Option : 3

Q.30 Identify the sentence(s) with no spelling errors from the given sentences.

- I. A limitation of this new model is its two main pillars.
- II. Leadership is not about visibly outworking everybody.

- Ans
- 1. Both I and II
 - 2. Neither I nor II
 - 3. Only I
 - 4. Only II

Question ID : 630680218559
Chosen Option : 3

Q.31 If today is Monday, then what will be the day after 25 days?

- Ans
- 1. Friday
 - 2. Thursday
 - 3. Saturday
 - 4. Wednesday

Question ID : 630680218525
Chosen Option : 1

Q.32 As per the 2011 census of India, what is the approximate percent of Scheduled Tribes (ST)?

- Ans
- 1. 8.6
 - 2. 6.6
 - 3. 7.6
 - 4. 9.6

Question ID : 630680218484
Chosen Option : 2

Q.33 Disinvestment of PSUs is classified under which of the following economic reforms?

- Ans
- 1. Liberalisation
 - 2. Privatisation
 - 3. Globalisation
 - 4. Centralization

Question ID : 630680218476
Chosen Option : 2

Q.34 As per historians, the Sammakka Saralamma shrine in Warangal is reported to have been built during the ____ century.

- Ans
- 1. 15th
 - 2. 14th
 - 3. 12th
 - 4. 13th

Question ID : 630680218504
Chosen Option : 3

Q.35 Arrange the following iron and steel plants based on their location from north to south.

- I. Salem Steel Plant
- II. Bhadravati Steel Plant
- III. Bhilai Steel Plant

- Ans
- 1. II, I, III
 - 2. III, I, II
 - 3. III, II, I
 - 4. I, II, III

Question ID : 630680218456
Chosen Option : 2

Q.36 What is the correct order (from first to last) of the following fundamental duties mentioned in the Indian Constitution?

- I. To defend the country and render national service.
- II. To value and preserve the rich heritage of our composite culture.
- III. To develop the scientific temper.

- Ans
- 1. III, II, I
 - 2. III, I, II
 - 3. I, II, III
 - 4. II, III, I

Question ID : 630680218458
Chosen Option : 3

Q.37 Arrange the following in chronological order:

- A. Dr Burgula Ramakrishna Rao was elected chief minister of the Hyderabad State in its first democratic election.
- B. The Indian government conducted a military operation called Operation Polo to bring Hyderabad state into the Indian Union.
- C. The Commission consisting of HC Heda, Konda Venkat Ranga Reddy submitted its report and recommended the formation of Telangana state.
- D. M Chenna Reddy, founded the Telangana Praja Samithi (TPS) political party.

- Ans**
- 1. B, A, C, D
 - 2. D, A, C, B
 - 3. B, C, D, A
 - 4. C, B, A, D

Question ID : 630680218520
Chosen Option : 1

Q.38 Which of the following statements is correct regarding the corals?

- I. The Great Barrier Reef is the largest living structure on Earth and is situated in Indonesia.
- II. Blast fishing does not cause physical damage to corals.

- Ans**
- 1. Both I and II
 - 2. II only
 - 3. Neither I nor II
 - 4. I only

Question ID : 630680218444
Chosen Option : 4

Q.39 Kalyana Lakshmi scheme is launched by the Telangana government for girls who have completed 18 years of age at the time of marriage and whose parental income does NOT exceed _____ per annum.

- Ans**
- 1. ₹1 lakh
 - 2. ₹4 lakh
 - 3. ₹3 lakh
 - 4. ₹2 lakh

Question ID : 630680218514
Chosen Option : 4

Q.40 Which of the following statements is/are **NOT** correct regarding 'Right against Exploitation' of the Indian Constitution?

I. It includes four articles.

II. It provides protection against preventive detention.

- Ans**
- 1. Only I
 - 2. Only II
 - 3. Neither I nor II
 - 4. Both I and II

Question ID : **630680218457**
Chosen Option : **3**

Q.41 Identify the sentence with the correct usage of the present perfect tense.

I. She has forgotten all her files at home.

II. Your servant had called me.

- Ans**
- 1. Only II
 - 2. Only I
 - 3. Neither I nor II
 - 4. Both I and II

Question ID : **630680218549**
Chosen Option : **3**

Q.42 Read the following and select the correct statement(s):

A: WE Hub is a start-up incubator launched by the Telangana government exclusively for women entrepreneurs.

B: The full form of the TASK scheme launched by the Telangana government is Telangana Academy for Skill and Knowledge.

- Ans**
- 1. Only B
 - 2. Only A
 - 3. Neither A nor B
 - 4. Both A and B

Question ID : **630680218516**
Chosen Option : **4**

Q.43 Match the given idioms with their correct meanings.

Idiom		Meaning	
A	Be over the moon	1	Give up
B	Call it quits	2	To be extremely happy
C	Ill at ease	3	Uncomfortable
D	Make a living	4	To earn money

- Ans
- 1. A-1, B-2, C-3, D-4
 - 2. A-2, B-1, C-3, D-4
 - 3. A-4, B-1, C-3, D-2
 - 4. A-3, B-1, C-4, D-2

Question ID : 630680218555
Chosen Option : 2

Q.44 Arrange the following Indian states in descending order on the basis of seats allocated in the Council of States as of March 2023.

- Ans
- 1. Telangana, Jharkhand, Haryana, Uttarakhand
 - 2. Jharkhand, Telangana, Uttarakhand, Haryana
 - 3. Telangana, Jharkhand, Uttarakhand, Haryana
 - 4. Jharkhand, Telangana, Haryana, Uttarakhand

Question ID : 630680218460
Chosen Option : 3

Q.45 Dhokra or Dokra is also known as bell metal craft and is widely seen in _____ district of Telangana.

- Ans
- 1. Adilabad
 - 2. Nalgonda
 - 3. Nizamabad
 - 4. Warangal

Question ID : 630680218500
Chosen Option : 1

Q.46 Match the following parts of body with the type of tissues they have?

	Part		Tissue type
I	Skin	1	Cuboidal epithelium
II	Ducts of salivary glands	2	Columnar epithelium
III	Inner lining of intestine	3	Squamous epithelium

- Ans
- 1. I-3, II-2, III-1
 - 2. I-2, II-3, III-1
 - 3. I-2, II-1, III-3
 - 4. I-3, II-1, III-2

Question ID : 630680218433
Chosen Option : 4

Q.47 Which of the following statements is correct regarding World Day of Social Justice?

- I. Every year, February 20 marks the World Day of Social Justice across the globe.
- II. The main goal of commemorating this day is to raise a voice against social injustice and to bring various communities together.
- III. The theme for 2023 was "Overcoming Barriers and Unleashing Opportunities for Social Justice".

- Ans
- 1. Only I and III
 - 2. Only I and II
 - 3. Only II and III
 - 4. I, II and III

Question ID : 630680218424
Chosen Option : 4

Q.48 Identify the correct pair of synonyms.

I. Flourishing: Abundant

II. Lethargic: Lazy

III. Fishy: Certain

IV. Restrict: Afford

Ans 1. Only I, III and IV

2. Only I and II

3. Only II and III

4. Only IV

Question ID : 630680218557

Chosen Option : 2

Q.49 Read the following and choose the correct statement(s):

A: As of 2022, Telangana is ranked 4th in India in terms of solar power production (as per reports of the Ministry of Statistics and Programme Implementation).

B: As of 2022, Telangana is ranked 2nd in India in terms of solar power capacity per unit area of land mass (as per reports of the Ministry of Statistics and Programme Implementation).

Ans 1. Only B

2. Both A and B

3. Neither A nor B

4. Only A

Question ID : 630680218507

Chosen Option : 1

Q.50 Match the following revolt/Rebellion of India and their years.

	Revolt		Year
I	Santhal Revolt	1	1910
II	Bastar Rebellion	2	1940
III	Warli Revolt	3	1855

- Ans
- 1. I-3, II-2, III-1
 - 2. I-3, II-1, III-2
 - 3. I-1, II-2, III-3
 - 4. I-2, II-3, III-1

Question ID : 630680218472
Chosen Option : 4

Q.51 Which of the following statements is correct regarding ADITYA-L1 mission?

- I. Aditya L1 shall be the second space based Indian mission to study the Sun.
- II. The spacecraft shall be placed in a halo orbit around the Lagrange point 1 of the Sun-Earth system.
- III. One of the objectives of this mission is to study physics of solar corona and its heating mechanism.

- Ans
- 1. Only I and III
 - 2. Only II
 - 3. Only II and III
 - 4. Only I

Question ID : 630680218422
Chosen Option : 3

Q.52 From the four sentences given below, identify the sentence(s) with a grammatical error.

I. My new job is harder than my old one.

II. I am not associated with any terrorist group.

III. I am sorry you are not feeling well.

IV. I did not knew you had a son.

Ans 1. Only I and IV

2. Only IV

3. Only I, II and III

4. Only II and III

Question ID : 630680218547

Chosen Option : 4

Q.53 Match the following heritage sites and their respective location/district:

Heritage site	Location/district
A. Devarakonda fort	1. Nizamabad
B. Domakonda Fort	2. Adilabad
C. Niramal fort	3. Karimnagar
D. Elagandula Khilla	4. Nalgonda

Ans 1. A-2, B-1, C-4, D-3

2. A-1, B-2, C-4, D-3

3. A-4, B-1, C-2, D-3

4. A-3, B-1, C-2, D-4

Question ID : 630680218502

Chosen Option : 4

Q.54 With respect to fertilizers used in India, what is the ideal Nitrogen:Phosphorus:Potassium (NPK) ratio for soils?

Ans 1. 28:11:3

2. 4:2:1

3. 28:15:7

4. 15:7:3

Question ID : 630680218440

Chosen Option : 1

Q.55 Arrange the following kingdoms in decreasing order with respect to the number of wars they fought with the British East India Company.

I. Mysore

II. Maratha

III. Sikh

- Ans**
- 1. II, I, III
 - 2. I, III, II
 - 3. III, II, I
 - 4. I, II, III

Question ID : 630680218474
Chosen Option : 1

Q.56 How many MLA seats did Telangana Rashtra Samithi win in the General Elections held in April 2014 to emerge victorious and form government in Telangana state?

- Ans**
- 1. 63
 - 2. 93
 - 3. 53
 - 4. 73

Question ID : 630680218517
Chosen Option : 4

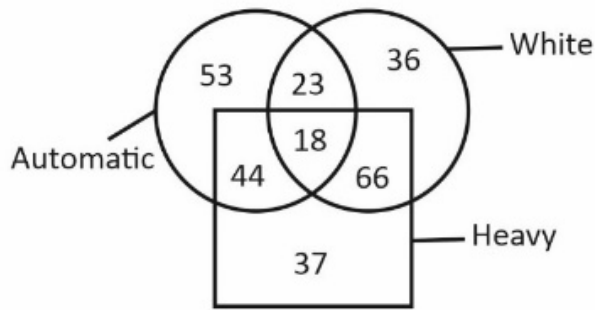
Q.57 Match the following Five-Year Plan with their main objective.

	Plan		Objective
I	Second five-Year Plan	1	Rapid Industrialization- Heavy & basic industries
II	Fifth five-Year Plan	2	Towards Faster & More Inclusive Growth
III	Eleventh five-Year Plan	3	Attainment of self-reliance

- Ans**
- 1. I-2, II-3, III-1
 - 2. I-3, II-2, III-1
 - 3. I-1, II-3, III-2
 - 4. I-1, II-2, III-3

Question ID : 630680218482
Chosen Option : 3

Q.58 The diagram given below shows the number of fans of different types.



Arrange the following in the increasing order of their numbers.

I. Heavy automatic fans

II. Heavy white fans

III. Automatic white fans

- Ans
- ✓ 1. III < I < II
 - ✗ 2. I < III < II
 - ✗ 3. I < II < III
 - ✗ 4. III < II < I

Question ID : 630680218529

Chosen Option : 1

Q.59 Read the following and choose the correct statement(s):

A: Malinadha Suri from Medak made Telugu interpretations of Kalidasa's poems.

B: Baddena wrote 'Neethi Shastra Muktavali'.

- Ans
- ✗ 1. Only B
 - ✓ 2. Both A and B
 - ✗ 3. Only A
 - ✗ 4. Neither A nor B

Question ID : 630680218498

Chosen Option : 2

Q.60 Price of five cars C1, C2, C3, C4 and C5 are compared. Price of C1 is the least. No two cars have the same price. Price of C3 is less than C5, C2 and C4. Price of neither C5 nor C2 is the highest. Price of C5 is less than C2. Price of how many cars is less than the price of C2?

- Ans**
- 1. 2
 - 2. 3
 - 3. 4
 - 4. 1

Question ID : 630680218532
Chosen Option : 2

Q.61 Select the correct active form of the given sentence.

Some chocolates are distributed by the organisation.

- Ans**
- 1. The organization has distributed some chocolates.
 - 2. The organisation distributed some chocolates.
 - 3. The organisation distributes some chocolates.
 - 4. The organisation distributing some chocolates.

Question ID : 630680218554
Chosen Option : 1

Q.62 Phytoplankton are generally part of which trophic level in an ecosystem?

- Ans**
- 1. Third
 - 2. First
 - 3. Second
 - 4. Fourth

Question ID : 630680218435
Chosen Option : 2

Q.63 Which is the descending order of the following positions with respect to rank and precedence in the Indian political system?

I. Former Presidents

II. Governors of the states within their respective states.

III. Chief Justice of India

- Ans**
- 1. III, II, I
 - 2. II, I, III
 - 3. II, III, I
 - 4. I, II, III

Question ID : 630680218465
Chosen Option : 1

Q.64 Members of which phylum of animal kingdom are commonly known as sponges?

- Ans
- 1. Annelida
 - 2. Mollusca
 - 3. Porifera
 - 4. Platyhelminthes

Question ID : 630680218434
Chosen Option : 3

Q.65 Select the option that is related to the fifth letter cluster in the same way as the second letter cluster is related to the first letter cluster and fourth letter cluster is related to third letter cluster.

POND : RLRV :: SALT : UXPO :: KINT : ?

- Ans
- 1. MERO
 - 2. MFSO
 - 3. MEQO
 - 4. MFRO

Question ID : 630680218536
Chosen Option : 4

Q.66 Six women A, B, C, D, E and F are sitting around a circular table facing towards the centre (not necessarily in the same order). Two women are sitting between A and D. Two women are sitting between C and F. B is not the neighbour of A or C. A is not sitting to the immediate left of E. Who is sitting second to the right of C?

- Ans
- 1. D
 - 2. B
 - 3. F
 - 4. A

Question ID : 630680218524
Chosen Option : 3

Q.67 Match the following years and related events with respect to census of India.

	Year		Events
I	1872	1	First census of India was conducted
II	1948	2	Census Act was enacted
III	1951	3	First census conducted of Independent India

- Ans
- 1. I-1, II-3, III-2
 - 2. I-3, II-2, III-1
 - 3. I-1, II-2, III-3
 - 4. I-3, II-1, III-2

Question ID : 630680218451

Chosen Option : 3

Q.68 Select the most appropriate pair of homonyms for the given blanks.

His live _____ concert in my city was _____ by the music organisation.

- Ans
- 1. bass, base
 - 2. banned, band
 - 3. band, banned
 - 4. base, bass

Question ID : 630680218562

Chosen Option : 3

Q.69 Bonalu is a Hindu Festival, celebrated during the Telugu month of _____ in Telangana.

- Ans
- 1. Ashadam
 - 2. Sravanam
 - 3. Pushyam
 - 4. Magham

Question ID : 630680218501

Chosen Option : 1

Q.70 Read the following and select the correct statement(s):

A: Bharat Heavy Electricals Limited (BHEL) has bagged the contract for the construction of the Yadadri Ultra Mega Power Plant (UMPP).

B: Yadadri Ultra Mega Power Plant (UMPP) is a 4,000-megawatt (MW) power station.

- Ans**
- 1. Neither A nor B
 - 2. Only B
 - 3. Only A
 - 4. Both A and B

Question ID : 630680218495
Chosen Option : 4

Q.71 Select the most appropriate pair of homonyms for the given blanks.

I _____ somewhere that an apple is _____ in colour.

- Ans**
- 1. red, read
 - 2. read, raid
 - 3. raid, read
 - 4. read, red

Question ID : 630680218561
Chosen Option : 4

Q.72 Which is the correct order (first to last) of the chapters of Part VI of the Indian Constitution?

- Ans**
- 1.
The State Legislature, The Legislative power of the Governor, The High Courts in the States
 - 2.
The High Courts in the States, The Legislative power of the Governor, The State Legislature
 - 3.
The Legislative power of the Governor, The High Courts in the States, The State Legislature
 - 4.
The High Courts in the States, The State Legislature, The Legislative power of the Governor

Question ID : 630680218464
Chosen Option : 2

Q.73 The question given below has a question and two statements. Choose the correct option on the basis of the question and statements.

What is the percentage discount on shirt?

I. The marked price of shirt is Rs. 360 and it is sold for Rs. 318.

II. After giving a discount of Rs. 35, the shirt was sold for Rs. 325.

Ans  1.

The question can be answered by using either of the statement I or II alone.

 2.

The question can be answered by using one of the statements alone but cannot be answered by using the other statement alone.

 3.

The question cannot be answered by even by using both the statements together.

 4.

The question can be answered by using both the statements together but not by either statement alone.

Question ID : 630680218539


Chosen Option : 4


Q.74 Which is the chronological order (first to last) of events following their occurrence with respect to transport development in India?


I. Establishment of the Border Roads Organisation


II. The Golden Quadrilateral Super Highways project is launched.

III. The first train of India steams off from Mumbai to Thane.

Ans  1. III, II, I

 2. I, III, II

 3. III, I, II

 4. I, II, III

Question ID : 630680218455

Chosen Option : 3


Q.75 Which of the following statements is correct regarding the Asian Infrastructure Investment Bank (AIIB)?


I. In January 2022, former RBI governor Urjit Patel was appointed as vice president of the AIIB.


II. In November 2022, Afghanistan was removed as a member of the AIIB.

III. In March 2023, Japan became the biggest shareholder in the AIIB.

Ans  1. Only I

 2. Only III

 3. Only II and III

 4. Only I and II

Question ID : 630680218416

Chosen Option : 4

Q.76 Arrange the following Indian states with respect to their poverty ratio from high to low as per census India 2011.

I. Kerala

II. Punjab

III. Gujarat

- Ans**
- 1. II, I, III
 - 2. III, II, I
 - 3. I, II, III
 - 4. III, I, II

Question ID : 630680218452
Chosen Option : 1

Q.77 Which of the following articles of the Indian Constitution has provisions related to the Organisation of Village Panchayats?

- Ans**
- 1. Article 40
 - 2. Article 64
 - 3. Article 76
 - 4. Article 55

Question ID : 630680218468
Chosen Option : 2

Q.78 Which of the following statements is correct regarding the United Nations Statistical Commission?

I. In April 2023, India has been elected to the United Nations Statistical Commission.

II. India has been elected for a two-year term beginning January 1, 2024.

- Ans**
- 1. Only II
 - 2. Only I
 - 3. Neither I nor II
 - 4. Both I and II

Question ID : 630680218415
Chosen Option : 4

Q.79 After the bifurcation of Andhra Pradesh, the Telangana state is the _____ largest State in terms of both area and the size of the population in the country.

- Ans**
- 1. 13th
 - 2. 10th
 - 3. 8th
 - 4. 12th

Question ID : 630680218490
Chosen Option : 4

Q.80 Which of the following statements is correct regarding the Indian Constitution?

- I. Article 161 of the constitution provides for an Advocate-General for the State.
- II. The Advocate-General of a state shall hold office during the pleasure of the Prime Minister.
- III. The Advocate-General of a state shall receive such remuneration as the Governor may determine.

- Ans**
- 1. Only I and III
 - 2. Only III
 - 3. Only I
 - 4. Only I and II

Question ID : 630680218463
Chosen Option : 3

Q.81 Which of the following pairs is correct regarding time periods and economic development in India?

- I. Mid 1960s to mid-1970s: First phase of the green revolution
- II. Mid 1970s to mid-1990s: Second phase of the green revolution

- Ans**
- 1. Only II
 - 2. Both I and III
 - 3. Only I
 - 4. Neither I nor II

Question ID : 630680218483
Chosen Option : 2

Q.82 The Indian satellites that is placed in geostationary orbit (GEO) and geosynchronous orbit (GSO) and can be used in the early warning of disasters is called _____.

- Ans**
- 1. GaruDA
 - 2. NavIC
 - 3. RakshAK
 - 4. SanIK

Question ID : 630680218437
Chosen Option : 2

Q.83 The Second Round Table Conference was held in _____.

- Ans**
- 1. December 1932
 - 2. December 1933
 - 3. December 1931
 - 4. December 1930

Question ID : 630680218469
Chosen Option : 3

Q.84 Which of the following five-year plans was launched after the new economic policy of 1991?

- Ans
- 1. Fifth five-year plan
 - 2. Seventh five-year plan
 - 3. Eighth five-year plan
 - 4. Sixth five-year plan

Question ID : 630680218478
Chosen Option : 2

Q.85 The elections of local bodies are conducted by the _____.

- Ans
- 1. High Court of concerned State
 - 2. Election Commission of India
 - 3. Governor of concerned State
 - 4. State Election Commission

Question ID : 630680218467
Chosen Option : 2

Q.86 Which day of week was there on 6th July 2011?

- Ans
- 1. Thursday
 - 2. Tuesday
 - 3. Monday
 - 4. Wednesday

Question ID : 630680218527
Chosen Option : 3

Q.87 Read the following and choose the correct statement(s):

A: Medak fort was built during the reign of the Kakatiyan ruler, Pratapa Rudra.

B: Medak fort was built in the 12th century.

- Ans
- 1. Both A and B
 - 2. Neither A nor B
 - 3. Only B
 - 4. Only A

Question ID : 630680218503
Chosen Option : 3

Q.88 Which of the following Central Public Sector Enterprises is classified as Maharatnas company?

- Ans**
- 1. Airport Authority of India
 - 2. Tourism Corporation Limited
 - 3. Indian Oil Corporation Limited
 - 4. Mahanagar Telephone Nigam Limited

Question ID : 630680218477
Chosen Option : 4

Q.89 Identify the correct pair of antonyms.

- I. Alike: Connate
- II. Mellow: Harsh
- III. Slight: Strong
- IV. Classy: Flashy

- Ans**
- 1. Only I, II and III
 - 2. Only III and IV
 - 3. Only II, III and IV
 - 4. Only I and II

Question ID : 630680218558
Chosen Option : 1

Q.90 GRIHA (Green Rating for Integrated Habitat Assessment) which evaluates environmental performance of a building was developed by _____.

- Ans**
- 1. Central Pollution Control Board (CPCB)
 - 2. National Green Tribunal (NGT)
 - 3. Bombay Natural History Society (BNHS)
 - 4. The Energy and Resource Institute (TERI)

Question ID : 630680218443
Chosen Option : 4

Q.91 Which of the following is the correct descending order of the share of given countries in India's Inward remittances for 2020-21?

- Ans**
- 1. United Arab Emirates, Singapore, United Kingdom
 - 2. United Kingdom, Singapore, United Arab Emirates
 - 3. Singapore, United Kingdom, United Arab Emirates
 - 4. United Arab Emirates, United Kingdom, Singapore

Question ID : 630680218418
Chosen Option : 3

Q.92 As per bill passed for separation of Telangana, in 2014, for how many years from the appointed day of Telangana formation Hyderabad will be the common capital for both states?

- Ans**
- 1. 8 years
 - 2. 5 years
 - 3. 15 years
 - 4. 10 years

Question ID : 630680218519
Chosen Option : 4

Q.93 Which of the following statements is correct regarding the air pollutants?

- I. PM_{2.5} is more likely to travel into and deposit on the surface of the deeper parts of the lung.
- II. PM₁₀ is more likely to deposit on the surfaces of the larger airways of the upper region of the lung.
- III. Both PM_{2.5} and PM₁₀ are bigger than human hair.

- Ans**
- 1. I, II and III
 - 2. Only I and II
 - 3. Only I
 - 4. Only II

Question ID : 630680218445
Chosen Option : 1

Q.94 Which of the following pair of element : atomic mass is correct?

- I. Sodium : 23
- II. Sulphur : 32

- Ans**
- 1. Only II
 - 2. Only I
 - 3. Neither I nor II
 - 4. Both I and II

Question ID : 630680218432
Chosen Option : 4

Q.95 Select the most appropriate option to fill in the blank.

When one tree was chopped down, another _____ to ensure continuity.

- Ans
- 1. plants
 - 2. was planting
 - 3. planted
 - 4. was planted

Question ID : 630680218545
Chosen Option : 3

Q.96 Which of the following statements is correct regarding the Governor of a State in India?

I. Unlike the president, the governor of a state does not have the power to promulgate ordinances during the recess of the state legislature.

II. The governor is appointed by the president.

- Ans
- 1. Neither I nor II
 - 2. Only II
 - 3. Only I
 - 4. Both I and II

Question ID : 630680218462
Chosen Option : 4

Q.97 During which Telugu month does the Medaram Jathara begin in Telangana?

- Ans
- 1. Pushya
 - 2. Magha
 - 3. Chaitra
 - 4. Phalguna

Question ID : 630680218505
Chosen Option : 3

Q.98 In India, Port Blair is located in which Seismic zone?

- Ans
- 1. Zone II
 - 2. Zone I
 - 3. Zone V
 - 4. Zone IV

Question ID : 630680218438
Chosen Option : 4

Q.99 Which of the following statements is correct regarding the Sugar Industry in India?

- I. The raw material used in this industry is bulky, and in haulage its sucrose content reduces.
- II. This industry is seasonal in nature.

- Ans**
- 1. Both I and II
 - 2. Only II
 - 3. Neither I nor II
 - 4. Only I

Question ID : 630680218454
Chosen Option : 1

Q.100 A person starts from point P and walks towards South for 25 km to reach point Q. He now takes a right turn and walks for 15 km to reach point R. He now takes a left and walks for 10 km to reach point S. he now takes a left and walks for 15 km to reach point T?

Which of the following statements is correct?

- I. T is south of P.
- II. S is north-east of P.
- III. Distance between T and P is 35 km.

- Ans**
- 1. I, II and III
 - 2. Only II and III
 - 3. Only I and II
 - 4. Only I and III

Question ID : 630680218535
Chosen Option : 4

Q.101 Arrange the following in chronological order:

- A. Telangana became Hyderabad State with the appointment of M.A. Vellodi as chief minister.
- B. First elections held in Hyderabad State
- C. 'Jai Telangana' movement for separate statehood to Telangana began.

- Ans**
- 1. A, B, C
 - 2. B, C, A
 - 3. B, A, C
 - 4. A, C, B

Question ID : 630680218518
Chosen Option : 1

Q.102 Consider the following and select the correct pair(s):

Scheme	Launch year
A. Kanti Velugu	2018
B. Dalit Bandhu	2021
C. Mana ooru - Mana badi	2022
D. KCR Nutrition Kit	2015

- Ans
- 1. A, B, C and D
 - 2. Both A and D
 - 3. Only A, B and C
 - 4. Both A and C

Question ID : 630680218511
Chosen Option : 2

Q.103 Who was the first to argue that in the face of high deficits, people would save more?

- Ans
- 1. Alfred Marshall
 - 2. David Ricardo
 - 3. Adam Smith
 - 4. Amartya Sen

Question ID : 630680218479
Chosen Option : 4

Q.104 Which of the following pairs is correct regarding West Asian Quad?

- Ans
- 1. I2U2 – India, Indonesia, the United Kingdom, and the USA
 - 2. I2U2 – India, Israel, the UAE, and the USA
 - 3. I2U2 – India, Israel, the United Kingdom, and the USA
 - 4. I2U2 – India, Indonesia, the United Kingdom, and the UAE

Question ID : 630680218417
Chosen Option : 4

Q.105 What is the chronological order (first to last) of launching of following social scheme of government of India?

- I. Prime Minister Rozgar Yozana
- II. Rural Employment Generation Programme
- III. Swarnajayanti Gram Swarozgar Yojana

- Ans**
- 1. II, I, III
 - 2. I, II, III
 - 3. I, III, II
 - 4. III, II, I

Question ID : 630680218453
Chosen Option : 2

Q.106 Which of the following statements is correct regarding India Science, Technology and Engineering facilities Map (I-STEM)?

- I. It has organized the Tech Management Conclave in 2023 at the Indian Institute of Science (IISc).
- II. The theme of the I-STEM initiative is linking researchers and resources.

- Ans**
- 1. Only II
 - 2. Only I
 - 3. Both I and II
 - 4. Neither I nor II

Question ID : 630680218421
Chosen Option : 3

Q.107 Which city of Telangana has been recognized as the “Tree City of the World- 2021” by the Arbor Day Foundation and the Food and Agriculture Organisation (FAO) of the United Nations for the second consecutive year?

- Ans**
- 1. Adilabad
 - 2. Karimnagar
 - 3. Hyderabad
 - 4. Warangal

Question ID : 630680218493
Chosen Option : 3

Q.108 In January 2023, Jal Jeevan Mission (JJM) has achieved _____ crores tap connections.

- Ans**
- 1. 11
 - 2. 6
 - 3. 18
 - 4. 8

Question ID : 630680218426
Chosen Option : 3

Q.109 In India, with respect to disaster reduction, the prime minister in 2016 gave how many points for disaster risk reduction?

- Ans**
- 1. Nine points agenda
 - 2. Seven points agenda
 - 3. Eight points agenda
 - 4. Ten points agenda

Question ID : **630680218436**
Chosen Option : **1**

Q.110 What is the theme of the 'National Science Day 2023'?

- Ans**
- 1. Global Science for Global Well being
 - 2. Radiation and Radioisotopes in Healthcare
 - 3. Science for the People and the People for Science
 - 4. Science & Technology for Specially abled Persons

Question ID : **630680218420**
Chosen Option : **3**

Q.111 In the following question, two statements are given. There may be a cause-and-effect relationship between the two statements. Identify the correct relation between the statements and choose the correct option.

Statement A: Company Z laid off an estimated 120,000 workers to reduce cost.

Statement B: Company Z wants to cut costs and remain competitive in a challenging economic environment.

- Ans**
- 1. If statement A is the cause and statement B is its effect.
 - 2.

If both the statements A and B are effects of independent causes.

- 3. If statement B is the cause and statement A is its effect.
- 4. If both the statements A and B are independent causes.

Question ID : **630680218540**
Chosen Option : **3**

Q.112 Arrange the following schemes of Telangana government in the chronological order (launch year):

- A. KCR Nutrition Kit
- B. Dalit Bandhu
- C. Kanti Velugu
- D. Kalyana Lakshmi

- Ans**
- 1. D, C, B, A
 - 2. A, B, D, C
 - 3. A, C, D, B
 - 4. A, B, C, D

Question ID : 630680218510
Chosen Option : 3

Q.113 Article 226 of the Indian Constitution mentions about _____.

- Ans**
- 1. power of Supreme Court of India to issue certain writs
 - 2. oath or affirmation by Judges of High Courts
 - 3. power of High Courts to issue certain writs
 - 4. oath or affirmation by Judges of Supreme Court of India

Question ID : 630680218461
Chosen Option : 1

Q.114 Five girls F, K, M, P and R are sitting in a row facing towards south (not necessarily in the same order). No one is sitting towards the right of F. Three girls are sitting towards the left of R. K is second to the left of M. Who is sitting third to the right of K?

- Ans**
- 1. R
 - 2. P
 - 3. F
 - 4. M

Question ID : 630680218523
Chosen Option : 2

Q.115 Match the scheme and its respective description:

Scheme	Description
A. KCR Nutrition Kit	1. Creation of effective infrastructure in schools
B. Mana ooru - Mana badi	2. One-time grant of ₹10,00,000
C. Dalit Bandhu	3. Launched in 2018
D. Kanti Velugu	4. Aimed at reducing Anaemia

- Ans
- 1. A-1, B-2, C-4, D-3
 - 2. A-2, B-1, C-3, D-4
 - 3. A-4, B-1, C-2, D-3
 - 4. A-2, B-1, C-4, D-3

Question ID : 630680218508
Chosen Option : 3

Q.116 The 2021 Nobel Prize in Physiology or Medicine is given for the _____.

- Ans
- 1. discovery of new variety of GM cotton crop
 - 2. discovery of genome editing method
 - 3. discovery of cause of covid-19 mutation
 - 4. discovery of receptors for temperature and touch

Question ID : 630680218429
Chosen Option : 2

Q.117 Letters given on the left side of (:) are related with the letters given on the right side of (:) by some Logic/Rule/Relation. Select the correct alternative from the given alternatives based on the same Logic/Rule/Relation.

PASTE : QCVXJ

- Ans
- 1. POSCA : QQVGE
 - 2. STOUT : TVRY Y
 - 3. CREEP : DTHHU
 - 4. JUICE : LWLGJ

Question ID : 630680218537
Chosen Option : 2

Q.118 Identify the sentence(s) with no spelling errors from the given sentences.

- I. The driver stops at the crowded entrnce.
- II. She pushes the button and glances back at me.
- III. Our goal is to provide some answers.
- IV. Atitudes and actions have direct consequences.

- Ans
- 1. Only I and II
 - 2. Only II and III
 - 3. Only III and IV
 - 4. Only I, II and IV

Question ID : 630680218560
Chosen Option : 2

Q.119 The Depressed Classes Association was founded by _____.

- Ans
- 1. Jyotiba Phule
 - 2. Mahatma Gandhi
 - 3. Lala Lajpat Rai
 - 4. Bhimrao Ambedkar

Question ID : 630680218470
Chosen Option : 1

Q.120 "Garibi Hatao" was one of the two main objectives of which Five-Year Plan of India?

- Ans
- 1. Sixth Five-Year Plan
 - 2. Eighth Five-Year Plan
 - 3. Seventh Five-Year Plan
 - 4. Fifth Five-Year Plan

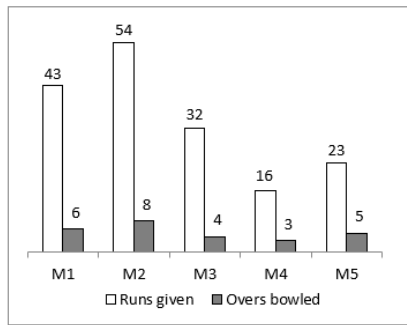
Question ID : 630680218481
Chosen Option : 1

Q.121 As per the fifth World Air Quality Report prepared by IQAir based on the annual average level of pollutant PM2.5 in air, Delhi is the _____ polluted city in the World.

- Ans
- 1. second most
 - 2. third most
 - 3. most
 - 4. fourth most

Question ID : 630680218423
Chosen Option : 3

Q.122 The bar chart given below shows the number of runs given and overs bowled by a bowler in 5 matches.



Economy rate = Runs given/overs bowled

Which of the following is the correct order of economy rate for these 5 matches?

- Ans**
- ✓ 1. $M3 > M1 > M2 > M4 > M5$
 - ✗ 2. $M3 > M1 > M2 > M5 > M4$
 - ✗ 3. $M3 > M2 > M1 > M5 > M4$
 - ✗ 4. $M3 > M2 > M1 > M4 > M5$

Question ID : 630680218542
Chosen Option : 1

Q.123 Which type of vehicles is capable of running on 100 per cent petrol or 100 per cent bio-ethanol or a combination of both?

- Ans**
- ✗ 1. Natural Gas Vehicles
 - ✓ 2. Flex fuel vehicles
 - ✗ 3. Propane Vehicles
 - ✗ 4. Fuel Cell Vehicles

Question ID : 630680218428
Chosen Option : 2

Q.124 Read the following and select the correct statement(s):

A: As per reports of the Central Electricity Authority as on 31st August 2022, the total installed power capacity in Telangana was 18029.39 MW

B: In October 2020, the Telangana State Government rolled out a 10-year Electric Vehicle (EV) policy.

C: As per the Provisional Advance Estimates for 2022-23 given in Telangana Socio Economic Outlook 2023, Telangana's Gross State Domestic Product (GSDP) at current prices is ₹13.27 lakh crores.

- Ans**
- ✗ 1. Both B and C
 - ✗ 2. Only C
 - ✗ 3. Both A and B
 - ✓ 4. A, B and C

Question ID : 630680218496
Chosen Option : 4

Q.125 Kinnerasani River is an important tributary of which river flowing in Telangana?

- Ans
- 1. Cauvery
 - 2. Godavari
 - 3. Krishna
 - 4. Wainganga

Question ID : 630680218488
Chosen Option : 3

Q.126 Select the most appropriate option to fill in the blank.

A devotee accepts everything that happens _____ him as a gift of God.

- Ans
- 1. of
 - 2. to
 - 3. in
 - 4. on

Question ID : 630680218546
Chosen Option : 2

Q.127 Which of the following statement is correct regarding All India Survey on Higher Education (AISHE) 2020-2021 released in January 2023?

- I. The total enrollment in higher education has increased to nearly 4.14 crore in 2020-21.
- II. During 2020-21, the number of universities has increased by 70, and the number of colleges has increased by 1,453.

- Ans
- 1. Only I
 - 2. Only II
 - 3. Both I and II
 - 4. Neither I nor II

Question ID : 630680218425
Chosen Option : 3

Q.128 Which of the following pairs of organisations and its region is correct with respect to social and religious development in Indian?

- Ans
- 1. Dev Samaj – Madras
 - 2. Arya Samaj – Calcutta
 - 3. Brahmo Sabha – Punjab
 - 4. Paramhans Mandali – Bombay

Question ID : 630680218473
Chosen Option : 4

Q.129 Which of the following pairs of Committee and their respective fields is correct?

I. Alagh Committee: Educational reforms

II. Tendulkar Committee: Poverty estimation

- Ans**
- 1. Only I
 - 2. Both I and II
 - 3. Neither I nor II
 - 4. Only II

Question ID : 630680218450
Chosen Option : 2

Q.130 Which of the following pairs is correct regarding the trees/plants and their scientific names?

I. Mahua : *Bassia latifolia*

II. Mango : *Mangifera indica*

- Ans**
- 1. Neither I nor II
 - 2. Both I and II
 - 3. Only I
 - 4. Only II

Question ID : 630680218449
Chosen Option : 4

Q.131 What is the correct order (first to last) of the following articles regarding citizenship in which they appear in the Indian Constitution?

I. Parliament to regulate the right of citizenship by law.

II. Rights of citizenship of certain migrants to Pakistan.

III. Persons voluntarily acquiring citizenship of a foreign State not to be citizens.

- Ans**
- 1. II, III, I
 - 2. III, I, II
 - 3. I, II, III
 - 4. III, II, I

Question ID : 630680218459
Chosen Option : 3

Q.132 As per the Telangana State Development Planning Society (TSDPS), Planning Department report-2021 what is population Density (Persons / Sq Km)of Telangana?

- Ans
- 1. 512
 - 2. 412
 - 3. 212
 - 4. 312

Question ID : 630680218494
Chosen Option : 1

Q.133 What is the chronological order (first to last) of the following events?

- I. Direct Action Day
- II. End of World War II
- III. Cabinet Mission Plan

- Ans
- 1. III, II, I
 - 2. II, III, I
 - 3. II, I, III
 - 4. I, II, III

Question ID : 630680218475
Chosen Option : 1

Q.134 Consider the following and select the correct statement(s):

- A: Ramagundam Thermal Power Station is commissioned in 1971
- B: Yadadri TPS is an upcoming 4000 megawatt, supercritical thermal power project.
- C: Bhadradi Thermal Power Station is a proposed power plant project located near Edulla Bayyaram at Manuguru

- Ans
- 1. A, B and C
 - 2. Both A and B
 - 3. Only C
 - 4. Both B and C

Question ID : 630680218512
Chosen Option : 1

Q.135 Which of the following statements is correct regarding metals?

I. Metals can form positive ions by losing electrons to non-metals.

II. Metals combine with oxygen to form basic oxides.

- Ans
- 1. Neither I nor II
 - 2. Both I and II
 - 3. Only I
 - 4. Only II

Question ID : 630680218430
Chosen Option : 2

Q.136 As per the Telangana State Development Planning Society (TSDPS), Planning Department report-2021 what is the sex ratio (Females per 1000 males) of Telangana?

- Ans
- 1. 988
 - 2. 968
 - 3. 978
 - 4. 958

Question ID : 630680218492
Chosen Option : 3

Q.137 Which of the following statement is correct regarding transportation in plants?

I. Plant transport system will move energy from leaves and raw material from roots.

II. Xylem moves product of photosynthesis.

III. Phloem moves water and minerals.

- Ans
- 1. Only II
 - 2. No statement is correct
 - 3. Only I
 - 4. Only I and III

Question ID : 630680218431
Chosen Option : 4

Q.138 Into how many agro-climatic zones is Telangana state divided based on geographical characteristics such as rainfall, nature of soils, climate etc?

- Ans
- 1. 5
 - 2. 3
 - 3. 4
 - 4. 2

Question ID : 630680218491
Chosen Option : 4

Q.139 Read the following and choose the correct statement(s):

A: Telangana has been ranked 6th in India in the Sustainable Development Goals (SDGs) index for the year 2020-21.

B: Telangana has scored 69 out of 100 in the SDGs index for the year 2020-21.

C: Tamil Nadu scored less points than Telangana in Sustainable Development Goals (SDGs) index for the year 2020-21.

- Ans
- 1. A, B and C
 - 2. Both B and C
 - 3. Both A and B
 - 4. Only C

Question ID : 630680218509
Chosen Option : 1

Q.140 Which district of Telangana is rich in Manganese ore?

- Ans
- 1. Jagtial district
 - 2. Adilabad district
 - 3. Jogulamba Gadwal district
 - 4. Hanumakonda district

Question ID : 630680218489
Chosen Option : 1

Q.141 In India, to contest the election of a municipality, a person must have a minimum age of _____.

- Ans
- 1. 18
 - 2. 23
 - 3. 25
 - 4. 21

Question ID : 630680218466
Chosen Option : 1

Q.142 Select the most appropriate option to fill in the blank.

Radha never shares her secrets, _____?

- Ans
- 1. don't she
 - 2. does she
 - 3. didn't her
 - 4. is she

Question ID : 630680218551
Chosen Option : 2

Q.143 Saahil is standing at 30th position from the end in a row. If there are 98 people in the row, then what is his position from the start of the row?

- Ans
- 1. 67
 - 2. 68
 - 3. 69
 - 4. 70

Question ID : 630680218526
Chosen Option : 1

Q.144 ORS solutions are used to treat dehydration caused by diarrhoea, What does ORS stands for in ORS solutions?

- Ans
- 1. Organic Rehydration Substances
 - 2. Oral Rehydration Salts
 - 3. Oral Rehydration Substances
 - 4. Organic Rehydration Salts

Question ID : 630680218427
Chosen Option : 2

Q.145 Select the correct pair(s) from the following:

Heritage site	Location/district
A. Fort of Idgal	Adilabad
B. Kesavardhana panchamukha lingeswara temple	Jagtial
C. Gnana Saraswathi temple	Nirmal
D. Tringeswralyam	Siddipet

- Ans
- 1. Only A, C and D
 - 2. A, B, C and D
 - 3. Both A and D
 - 4. Both A and C

Question ID : 630680218499
Chosen Option : 1

Q.146 The New Education Policy (NEP) 2020 has introduced a new structure of _____.

- Ans
- 1. 4 + 4 + 4 + 3
 - 2. 5 + 3 + 3 + 4
 - 3. 5 + 5 + 2 + 3
 - 4. 6 + 3 + 3 + 3

Question ID : 630680218487
Chosen Option : 2

Q.147 With respect to Indian defence, what is BrahMos?

- Ans
- 1. Bulletproof jacket
 - 2. Indigenous Tank
 - 3. Nuclear submarine
 - 4. Missile

Question ID : 630680218419
Chosen Option : 4

Q.148 From the four sentences given below, identify the sentence(s) with a grammatical error.

- I. You should wash your clothes yourself.
- II. The remaining vacation slipped by quick, and life returned to normal.
- III. They were counting the number of students.
- IV. My cousin was born on July.

- Ans
- 1. All I, II, III and IV
 - 2. Only II and IV
 - 3. Only I
 - 4. Only III and IV

Question ID : 630680218548
Chosen Option : 1

Q.149 With respect to the Green Revolution in India, what does "HYV" stand for?

- Ans
- 1. Hyper Young Variety
 - 2. Hidden Yielding Variety
 - 3. High Yielding Variety
 - 4. Healthy Young Variety

Question ID : 630680218480
Chosen Option : 3

Q.150 The question given below has a question and two statements. Choose the correct option on basis of the question and statements.

What is the value of P?

I. Average of P, 36, 72 and 40 is 54.

II. P is 6 more than the average of 36, 38, 42 and 49.

Ans  1.

The question cannot be answered by even by using both the statements together.

 2.

The question can be answered by using either of the statement I or II alone.

 3.

The question can be answered by using both the statements together but not by either statement alone.

 4.

The question can be answered by using one of the statements alone but cannot be answered by using the other statement alone.

Question ID : **630680218538**
Chosen Option : **2**