

DELHI DEVELOPMENT AUTHORITY

DELHI DEVELOPMENT AUTHORITY

On-Line applications from eligible candidates as per the criteria laid down for
filling up of various posts including backlog vacancies

Roll No:	
Participant Name:	
Test Center Name:	Confinet It Solutions Pvt. Ltd
Test Date:	18/09/2017
Test Time:	2:30 PM - 3:45 PM
Subject:	Assistant Section Officer

Section : General Intelligence and Reasoning

Q.1 Ajit is Brij's brother. Charan is Ajit's father. Deep is Esha's brother. Esha is Brij's daughter, who is married to Jeet.
Who is Deep's grandfather?

- Ans
- 1. Ajit
 - 2. Jeet
 - 3. Charan
 - 4. Brij

Question ID : 4161331913
Status : Answered
Chosen Option : 3

Q.2 Ashtown is to the South of Beverley and Charlesville to the East of Beverley. In what direction is Ashtown with respect to Charlesville?

- Ans
- 1. South West
 - 2. North East
 - 3. North West
 - 4. South East

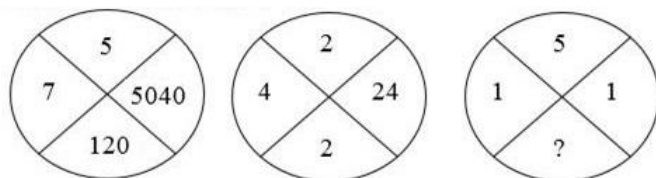
Question ID : 4161331901
Status : Answered
Chosen Option : 1

Q.3 What comes next in the series?
9, 10, 12, 15, 19, 24, ...

- Ans
- 1. 31
 - 2. 29
 - 3. 28
 - 4. 30

Question ID : 4161331916
Status : Answered
Chosen Option : 4

Q.4 Determine the missing number.



- Ans
- 1. 120
 - 2. 48
 - 3. 25
 - 4. 128

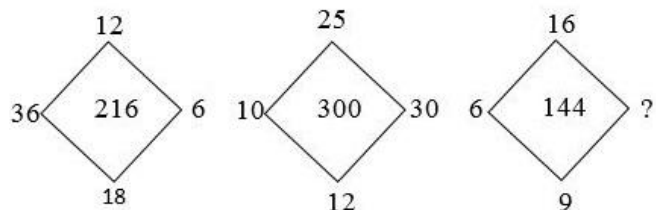
Question ID : 4161331912
Status : Not Answered
Chosen Option : --

Q.5

Question ID : 4161331908
Status : Answered

Determine the missing number.

Chosen Option : 3



- Ans
- 1. 49
 - 2. 36
 - 3. 24
 - 4. 25

Q.6 Today is Thursday. Six days ago, it was two days after three days before Christmas. Which day of the week will the New Years' day fall on?

- Ans
- 1. Saturday
 - 2. Sunday
 - 3. Thursday
 - 4. Friday

Question ID : 4161331906

Status : Answered

Chosen Option : 4

Q.7 What comes next in the series?
150, 170, 195, 225, 260, 300, ...

- Ans
- 1. 345
 - 2. 350
 - 3. 340
 - 4. 355

Question ID : 4161331919

Status : Answered

Chosen Option : 1

Q.8 Complete the analogy.
Lion : Den :: Dog : _____

- Ans
- 1. Puppy
 - 2. Bitch
 - 3. Bark
 - 4. Kennel

Question ID : 4161331914

Status : Answered

Chosen Option : 4

Q.9 An alphametic puzzle is one where each letter is to be replaced by a unique digit (which is not represented by any other letter).

What is the three-digit number in the last row in this alphametic puzzle?

$$\begin{array}{r}
 H E \\
 \times M E \\
 \hline
 B E \\
 Y E _ \\
 \hline
 E W E
 \end{array}$$

- Ans
- 1. 725
 - 2. 525
 - 3. 625
 - 4. 325

Question ID : 4161331900

Status : Answered

Chosen Option : 2

Q.10 If THRUST is coded as 176421 and NICE as 9358, what will be the code for HEURISTIC?

- Ans
- 1. 784623135
 - 2. 786432135
 - 3. 784632135

Question ID : 4161331911

Status : Answered

Chosen Option : 3

4. 784632315

Q.11 Complete the given analogy.

Doctor : Stethoscope :: _____ : Scalpel

- Ans 1. Mason
 2. Sailor
 3. Engineer
 4. Surgeon

Question ID : 4161331895

Status : Not Answered

Chosen Option : --

Q.12 If FARTHEST is coded as RAFHTTSE, what would DILUTION be coded as?

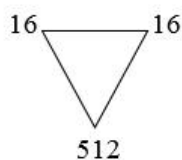
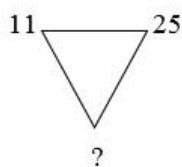
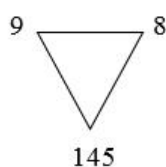
- Ans 1. DILUTNOI
 2. LINUTDOI
 3. LIDTUNOI
 4. LIDUTNOI

Question ID : 4161331898

Status : Answered

Chosen Option : 4

Q.13 Determine the missing number.



- Ans 1. 746
 2. 356
 3. 691
 4. 724

Question ID : 4161331902

Status : Answered

Chosen Option : 1

Q.14 Which pair of numbers completes the given analogy?

20 : 11 = 412 : 207 = _____ : _____

- Ans 1. 14 : 10
 2. 13 : 7
 3. 16 : 9
 4. 26 : 15

Question ID : 4161331915

Status : Not Answered

Chosen Option : --

Q.15 Ram has a brother, Shankar. Ram is Devika's son. Shekhar is Devika's father. How is Shankar related to Shekhar?

- Ans 1. Son
 2. Brother
 3. Grandson
 4. Uncle

Question ID : 4161331909

Status : Answered

Chosen Option : 3

Q.16 If SPLINTER is coded as 67408192, how will PRISTINE be coded as?

- Ans 1. 72016089
 2. 27061089
 3. 72061098
 4. 72061089

Question ID : 4161331899

Status : Answered

Chosen Option : 4

Q.17 Complete the given analogy.

Sailor : Ship :: _____ : Kitchen

- Ans 1. Chef

Question ID : 4161331917

Status : Answered

Chosen Option : 1

- 2. Housewife
- 3. Servant
- 4. Hearth

Q.18 Find the odd one out.
Dollar, Yen, Euro, Dirham, Carat

- Ans
- 1. Dollar
 - 2. Dirham
 - 3. Euro
 - 4. Carat

Question ID : 4161331918

Status : Answered

Chosen Option : 4

Q.19 Ahmed starts from his home in the eastern suburbs and walking straight towards the West, comes to a four-crossing. The road to the left takes one to the seaside, straight ahead is the university office and he turns right, proceeds 1 km and turns to the left to reach the library. In which direction is he walking now?

- Ans
- 1. North
 - 2. South
 - 3. East
 - 4. West

Question ID : 4161331907

Status : Answered

Chosen Option : 4

Q.20 Find the odd one out.

- Ans
- 1. Brigadier
 - 2. General
 - 3. Admiral
 - 4. Wing Commander

Question ID : 4161331904

Status : Answered

Chosen Option : 3

Q.21 Which pair of numbers completes the given analogy?
16 : 64 :: 49 : 343 :: _____ : _____

- Ans
- 1. 8 : 16
 - 2. 27 : 81
 - 3. 12 : 36
 - 4. 25 : 125

Question ID : 4161331903

Status : Answered

Chosen Option : 4

Q.22 If PANDER is coded as RDENAP, what would MUSCLE be coded as?

- Ans
- 1. LECSUM
 - 2. ECLUSM
 - 3. ELCSUM
 - 4. ECLSUM

Question ID : 4161331910

Status : Answered

Chosen Option : 4

Q.23 Which pair of numbers completes the given analogy?
169 : 196 :: 324 : 361 :: _____ : _____

- Ans
- 1. 625 : 676
 - 2. 256 : 625
 - 3. 389 : 425
 - 4. 279 : 324

Question ID : 4161331896

Status : Answered

Chosen Option : 1

Q.24 Find the odd one out.

- Ans
- 1. Radius
 - 2. Tangent
 - 3. Diameter

Question ID : 4161331897

Status : Answered

Chosen Option : 2

✓ 4. Arc

Q.25 If PLANT is coded as 43761 and STEAM as 91275, how will MANTLES be coded as?

- Ans
- ✗ 1. 5671329
 - ✗ 2. 5763129
 - ✗ 3. 5761239
 - ✓ 4. 5761329

Question ID : 4161331905
Status : Answered
Chosen Option : 4

Section : Quantitative Aptitude

Q.1 A cylindrical tank of diameter 5 m contains 1,00,000 litres of water. What is the water level in the tank?

- Ans
- ✓ 1. 5 m
 - ✗ 2. 50 m
 - ✗ 3. 500 m
 - ✗ 4. 5,000 m

Question ID : 4161331926
Status : Answered
Chosen Option : 4

Q.2 What is the length of the arc that subtends an angle of 60° at the centre of a circle of radius 7 cm?

- Ans
- ✗ 1. 11 cm
 - ✗ 2. 44 cm
 - ✗ 3. 22 cm
 - ✓ 4. 7.3 cm

Question ID : 4161331944
Status : Answered
Chosen Option : 4

Q.3 A buys used tins at 6 for a rupee and sells them at 3 for a rupee. What does he make?

- Ans
- ✗ 1. Loss of 100%
 - ✗ 2. Loss of 50%
 - ✓ 3. Gain of 100%
 - ✗ 4. Gain of 50%

Question ID : 4161331920
Status : Answered
Chosen Option : 3

Q.4 An isosceles triangle has two equal sides AB and AC of length 5 cm, and the other side BC is 8 cm long. What is the length of the perpendicular from C to AB?

- Ans
- ✗ 1. 5 cm
 - ✗ 2. 4 cm
 - ✓ 3. 4.8 cm
 - ✗ 4. 3 cm

Question ID : 4161331937
Status : Answered
Chosen Option : 3

Q.5 If $a + \frac{1}{a} = 3$, then what is the value of $a^2 + \frac{1}{a^2}$?

- Ans
- ✗ 1. 0
 - ✗ 2. 9
 - ✓ 3. 7
 - ✗ 4. 2

Question ID : 4161331940
Status : Answered
Chosen Option : 3

Q.6 What percent of 2 is 3?

- Ans
- ✗ 1. 40%
 - ✓ 2. 150%
 - ✗ 3. 67%
 - ✗ 4. 60%

Question ID : 4161331938
Status : Answered
Chosen Option : 2

Q.7 Which of the following is true about $\sqrt{2}$?

- Ans
- ✗ 1.

Question ID : 4161331921
Status : Answered
Chosen Option : 3

It is rational and can be expressed in the form of $\frac{p}{q}$ where p and q are integers.

2. It is a natural number.

3.

It is irrational and hence cannot be expressed in the form of $\frac{p}{q}$ where p and q are integers.

4. It is a complex number.

Q.8 A goes from City X to City Y at 40 km/hr, and returns at a speed of 80 km/hr. What is his average speed for the whole journey?

Ans 1. 80 km/hr

2. 60 km/hr

3. 53 km/hr

4. 57 km/hr

Question ID : 4161331924

Status : Answered

Chosen Option : 3

Q.9 Rani gets 3 marks for each correct answer and loses 1 mark for each wrong answer in a test containing 40 questions. If she scores 80 marks, what is the number of questions solved incorrectly by her?

Ans 1. 10

2. 20

3. 5

4. 30

Question ID : 4161331943

Status : Answered

Chosen Option : 1

Q.10 A vessel can be filled by a tap A in 8 minutes, and by another tap B in 10 minutes. A third tap C can empty the vessel in 4 minutes. If all taps are opened simultaneously when the vessel is half full, then which of the following is true?

Ans 1. The vessel will be filled in 20 minutes.

2. The vessel will be filled in 40 minutes.

3. The vessel will be emptied in 40 minutes.

4. The vessel will be emptied in 20 minutes.

Question ID : 4161331931

Status : Answered

Chosen Option : 4

Q.11 A and B working together can finish a piece of work in 4 days. If A working alone can finish it in 6 days, how long will B take to finish the same work?

Ans 1. 24 days

2. 10 days

3. 2 days

4. 12 days

Question ID : 4161331923

Status : Answered

Chosen Option : 4

Q.12 R is twice as old as his son S. Sixteen years ago, he was three times as old as S then was. If twenty-four years ago, R was five times as old as his granddaughter T is now, how many times older than T is S?

Ans 1. 5

2. 3

3. 4

4. 2

Question ID : 4161331927

Status : Answered

Chosen Option : 3

Q.13 A and B enter into a partnership with ₹ 10 lakhs each. After 3 months, A withdraws half of his capital, and then after another six months puts it back. The profit at the end of the year is ₹ 14 lakhs, how much should A get?

Ans 1. ₹ 4 lakhs

2. ₹ 10 lakhs

3. ₹ 6 lakhs

4. ₹ 3 lakhs

Question ID : 4161331933

Status : Answered

Chosen Option : 3

Q.14 In what proportion should fine Darjeeling tea costing ₹ 2500 per kg be mixed with coarse tea costing ₹ 500 per kg, so that the cost of the mixture is ₹ 1000?

Ans 1. 1 : 5

2. 1 : 3

3. 3 : 1

Question ID : 4161331934

Status : Answered

Chosen Option : 2

4. 1 : 2

Q.15 The equation $3x^2 - 4x - 5 = 0$ will have:

- Ans 1. one real and one complex root.
 2. two complex roots.
 3. two real roots which are equal.
 4. two real roots which are unequal.

Question ID : 4161331930

Status : Answered

Chosen Option : 2

Q.16 A person saves 40% of his income in Year 1. In Year 2, he gets an increment of 30% and manages to save 30%. Which of the following is definitely true?

- Ans 1. His expenses go up by 52%.
 2. His expenses go up by 10%.
 3. His expenses go up by 31%.
 4. His expenses remain the same.

Question ID : 4161331922

Status : Answered

Chosen Option : 1

Q.17 The profit of a company grew from ₹ 5 cr to ₹ 15 cr over 5 years. What is the compounded annual growth rate of the profit?

- Ans 1. Approximately 40%
 2. Approximately 25%
 3. Approximately 200%
 4. Approximately 300%

Question ID : 4161331935

Status : Answered

Chosen Option : 1

Q.18 What is the mode of the given numbers?

4, 5, 6, 6, 7, 7, 7, 7, 8, 8, 8, 9, 10, 10, 10

- Ans 1. 10
 2. 9
 3. 8
 4. 7

Question ID : 4161331932

Status : Answered

Chosen Option : 4

Q.19 During a storm, a tree broke at a point 5 m above the ground in such a way that the top of the tree touched the ground 12 m away from where it originally stood. What was the height of the tree before it broke?

- Ans 1. 18 m
 2. 13 m
 3. 17 m
 4. 12 m

Question ID : 4161331942

Status : Answered

Chosen Option : 1

Q.20 If a sum of money doubles in 5 years at simple interest, then what is the rate of interest?

- Ans 1. 25%
 2. 14.8%
 3. 5%
 4. 20%

Question ID : 4161331939

Status : Answered

Chosen Option : 4

Q.21 What is the value of $1 + \frac{1}{3} + \frac{1}{9} + \frac{1}{27} + \frac{1}{81} + \dots \infty$?

- Ans 1. ∞
 2. $\frac{3}{2}$
 3. 2
 4. 3

Question ID : 4161331941

Status : Answered

Chosen Option : 2

Q.22 A man sold two books for ₹ 600 each. He lost 20% on the first book and gained 50% on the second book. Which of these statements is true?

- Ans** 1. His overall gain was 4.35%.
 2. His overall gain was 4.17%.
 3. His overall gain was 30%.
 4. His overall gain was 35%.

Question ID : 4161331929

Status : Answered

Chosen Option : 1

Q.23 A volleyball team has 6 people. In how many different ways can teams be made from a class of 12 people?

- Ans** 1. 72
 2. 924
 3. 18
 4. 2

Question ID : 4161331925

Status : Not Answered

Chosen Option : --

Q.24 Two trains 150 m and 200 m long are travelling at 54 km/hr and 72 km/hr respectively towards each other on parallel tracks. How long will they take to pass each other completely?

- Ans** 1. 40 sec
 2. 30 sec
 3. 10 sec
 4. 20 sec

Question ID : 4161331936

Status : Answered

Chosen Option : 3

Q.25 The common difference of an Arithmetic Progression is three times the first term. If the fifth term is 26, then what is the tenth term?

- Ans** 1. 56
 2. 78
 3. 110
 4. 52

Question ID : 4161331928

Status : Answered

Chosen Option : 1

Section : General Awareness

Q.1 Where and when were the two atom bombs during World War II dropped?

- Ans** 1. Hiroshima and Nagasaki in 1944
 2. Hiroshima and Nagasaki in 1945
 3. Tokyo and Kyoto in 1942
 4. Hiroshima and Tokyo in 1945

Question ID : 4161331958

Status : Answered

Chosen Option : 2

Q.2 By what name is Vladimir Ilyich Ulyanov better known as?

- Ans** 1. Lenin
 2. Stalin
 3. Mao
 4. Castro

Question ID : 4161331966

Status : Answered

Chosen Option : 2

Q.3 In which part of India is Meitei spoken?

- Ans** 1. Manipur
 2. Tripura
 3. Mizoram
 4. Nagaland

Question ID : 4161331955

Status : Answered

Chosen Option : 3

Q.4 As of September 2017, who has won maximum number of Grand Slams among the following?

- Ans** 1. Rafael Nadal

Question ID : 4161331965

Status : Answered

Chosen Option : 4

2. Boris Becker
3. Serena Williams
4. Roger Federer

Q.5 What was the order of magnitude of India's software exports in 2015?

- Ans 1. \$100 bn
2. \$200 bn
3. \$50 bn
4. \$10 bn

Question ID : 4161331967
Status : Answered
Chosen Option : 1

Q.6 Which of the following fundamental rights is NOT guaranteed by the Constitution of India?

- Ans 1. Right to profession
2. Right to freedom of religion
3. Right to equality
4. Right to freedom

Question ID : 4161331946
Status : Answered
Chosen Option : 1

Q.7 Which of these companies is NOT an IT company?

- Ans 1. CTS
2. Larsen and Toubro
3. TCS
4. Infosys

Question ID : 4161331968
Status : Answered
Chosen Option : 2

Q.8 Which is the social network where professionals exchange information about themselves to advance business interests and careers?

- Ans 1. Facebook
2. LinkedIn
3. Google
4. Twitter

Question ID : 4161331964
Status : Answered
Chosen Option : 2

Q.9 Which was the first state to introduce the Mid-day meal scheme for children?

- Ans 1. Kerala
2. Gujarat
3. Tamil Nadu
4. Karnataka

Question ID : 4161331947
Status : Answered
Chosen Option : 1

Q.10 Which of the following is true about Vardhamana Mahavira who founded Jainism?

- Ans 1. He was born in modern day Karnataka.
2. He was the 24th Tirthankara.
3. He lived around 2000 BC.
4. He taught the Eightfold path.

Question ID : 4161331951
Status : Answered
Chosen Option : 4

Q.11 Where is the Silent Valley located?

- Ans 1. Gudalur district in Tamil Nadu and is so named because it is completely uninhabited
2. Adjacent to the Kaziranga game sanctuary in Assam and is so named because there is no human population nearby
- 3.

Question ID : 4161331956
Status : Answered
Chosen Option : 3

Arunachal Pradesh and is so named because of an absence of cicadas

4.

Palghat district in Kerala and is so named because of an absence of cicadas

Q.12 Which of these is NOT true about the World Bank?

Ans 1.

It is headquartered in Washington D.C. in the United States.

2.

It is generally headed by a citizen of the European Union.

3. It provides loans to developing countries.

4. It is part of the United Nation's network.

Question ID : 4161331952

Status : Answered

Chosen Option : 2

Q.13 Which of the following is true about Sardar Vallabhbhai Patel?

Ans 1. He was the first Congress President.

2.

He was the first president of the Swatantra Party.

3. He was the first Home Minister of India.

4. He was the first Chief Minister of Gujarat.

Question ID : 4161331950

Status : Answered

Chosen Option : 2

Q.14 What is Manjul Bhargav's claim to fame?

Ans 1.

He is a celebrated scientist in the UK who got the Nobel Prize in Chemistry.

2.

He is a lawyer in the US who is set to become a justice in the US Supreme Court.

3.

He is an author who got the Pulitzer prize in 2014.

4.

He is a mathematician settled in the US who got the Fields Medal, which is the highest honour in the subject.

Question ID : 4161331960

Status : Not Answered

Chosen Option : --

Q.15 Which of the following is a strong cotton working cloth, which gets its name from a village near Mumbai where it was first manufactured?

Ans 1. Calico

2. Bandanna

3. Jodhpur

4. Dungaree

Question ID : 4161331969

Status : Answered

Chosen Option : 4

Q.16 What does a hydrometer measure?

Ans 1. Vapour pressure of a liquid

2. Viscosity of a liquid

3. Surface tension of a liquid

4.

Relative density or specific gravity of a liquid

Question ID : 4161331953

Status : Answered

Chosen Option : 3

Q.17 Which of the following is an example of a chemical change?

Ans 1. Evaporation of water


2. Cooling of a room

3. Curdling of milk

Question ID : 4161331957

Status : Answered

Chosen Option : 3

 4. Heating of water

Q.18 Jagdish Bhagwati is an eminent American _____ of Indian origin.





- Ans  1. musician
 2. senator
 3. economist
 4. biologist

Question ID : 4161331963

Status : Not Answered

Chosen Option : --

Q.19 What is Wall Street most famous for?

- Ans  1.
 It is an area in Frankfurt where the European Central Bank is located.
 2.
 It is an area in Paris that houses the finest art collection in the world.
 3.
 It is an area in New York that has the New York Stock Exchange.
 4.
 It is an area in London where the London Stock Exchange is located.

Question ID : 4161331959

Status : Answered

Chosen Option : 3

Q.20 The Grameen Bank was established to help poor people with credit in which of India's neighbours?





- Ans  1. China
 2. Pakistan
 3. Bhutan
 4. Bangladesh

Question ID : 4161331949

Status : Answered

Chosen Option : 4

Q.21 What does the monetary policy of the government do?



- Ans  1. It changes taxation rates.
 2. It changes interest rates.
 3. It changes exchange rates.
 4. It changes lending policies.

Question ID : 4161331954

Status : Answered

Chosen Option : 2

Q.22 Find the odd one out.





- Ans  1. Java
 2. PowerPoint
 3. Excel
 4. Word

Question ID : 4161331962

Status : Answered

Chosen Option : 1

Q.23 What is the rainbow a result of?

- Ans  1. Interference of sunlight through raindrops
 2. Diffraction of sunlight through raindrops
 3. Polarisation of sunlight through raindrops
 4.
 Reflection and refraction of sunlight through raindrops

Question ID : 4161331961

Status : Answered

Chosen Option : 2

Q.24 With which musical instrument is the name of Lalgudi G Jayaraman associated?

- Ans  1. Veena
 2. Flute
 3. Violin

Question ID : 4161331948

Status : Not Answered

Chosen Option : --

4. Mridangam

Q.25 Which two countries play a cricket test series for the Frank Worrell Trophy?

- Ans 1. West Indies and Australia
 2. West Indies and New Zealand
 3. West Indies and Sri Lanka
 4. West Indies and England

Question ID : 4161331945

Status : Answered

Chosen Option : 4

Section : English Language and Comprehension

Q.1 Pinky accepted the invitation but _____ to dress according to the theme.
Which word would be the correct antonym of 'accepted' and used to fill the blank?

- Ans 1. forgot
 2. received
 3. refused
 4. loved

Question ID : 4161331993

Status : Answered

Chosen Option : 3

Q.2 Which of the four options means the same as the following statement?
No other exercise is as healthy as swimming

- Ans 1. Swimming is the healthiest exercise.
 2. Swimming is a healthy exercise.
 3.
 Other exercises are healthier than swimming.
 4.
 Swimming is not healthier than other exercises.

Question ID : 4161331981

Status : Answered

Chosen Option : 1

Q.3 Reorder the words / phrases to make a meaningful sentence.
turmeric/ tissue damage/ other visible signs/ the body from/ of ageing/
A B C D E

protects/and prevents wrinkles/ scars and
F G H

- Ans 1. D / F / A / E / B / C / G / H
 2. A / F / D / H / E / G / B / C
 3. A / F / D / B / G / H / C / E
 4. A / F / G / H / B / C / E / D

Question ID : 4161331983

Status : Answered

Chosen Option : 3

Q.4 Use the correct question tag to complete the sentence -
You think you're clever, _____?

- Ans 1. are you
 2. don't you
 3. aren't you
 4. do you

Question ID : 4161331982

Status : Answered

Chosen Option : 2

Q.5 Select the appropriate verb.

Two-thirds of the city _____ in ruins.

- Ans 1. is
 2. are
 3. has

Question ID : 4161331976

Status : Answered

Chosen Option : 1

4. were

Q.6 Replace the word in italics with a correct synonym.
The lady *revealed* the statue placed beneath the veil.

- Ans 1. showed
 2. tried
 3. left
 4. hid

Question ID : 4161331980
 Status : Answered
 Chosen Option : 1

Q.7 'Who wrote this book?'
Choose the correct form of the sentence in passive.

- Ans 1. By who was this book written?
 2. By whom was this book written?
 3. This book was written by whom?
 4. This book was written by who?

Question ID : 4161331985
 Status : Answered
 Chosen Option : 2

Q.8 'She is too good to be dishonest.'
This statement can also be understood as -

- Ans 1. She is too good so she cannot be honest.
 2. She is not so good so she is not dishonest.
 3. She is so good that she cannot be dishonest.
 4. She is good so she is dishonest.

Question ID : 4161331990
 Status : Answered
 Chosen Option : 3

Q.9 In which order would the following words be placed in a dictionary?

- Ans 1. aspic, ascetic, access, assess, accede
 2. accede, access, ascetic, aspic, assess
 3. access, aspic, accede, ascetic, assess
 4. ascetic, access, accede, assess, aspic

Question ID : 4161331972
 Status : Answered
 Chosen Option : 2

Q.10 He was appointed Principal *for the present time only, to be changed or replaced later.*
Choose the correct word to replace the words in italics.

- Ans 1. provisionally
 2. independently
 3. unconditionally
 4. instantaneously

Question ID : 4161331977
 Status : Answered
 Chosen Option : 1

Q.11 An apparatus to reduce the speed of a vehicle is:

- Ans 1. break
 2. barrack
 3. batter
 4. brake

Question ID : 4161331974
 Status : Answered
 Chosen Option : 4

Q.12 Complete the proverb - 'A picture is worth _____.'

- Ans 1. a thousand pounds
 2. a thousand words

Question ID : 4161331978
 Status : Answered
 Chosen Option : 2

3. a thousand lire
4. a thousand dollars

Q.13 Choose the correct 'sound word' to describe -
'The _____ of guns.'

- Ans 1. booming
2. bellowing
3. screeching
4. clashing

Question ID : 4161331971
Status : Answered
Chosen Option : 4

Q.14 'Arachnophobia' is:

- Ans 1. a fear of technology
2. a fear of arid places
3. a fear of open spaces
4. a fear of spiders

Question ID : 4161331984
Status : Answered
Chosen Option : 4

Q.15 'Please set down your terms _____.'
Complete the sentence.

- Ans 1. in blue blood
2. in the black
3. in the red
4. in black and white

Question ID : 4161331970
Status : Answered
Chosen Option : 3

Q.16 Which part of the following sentence has errors?
Every teacher / wants their / students / to achieve success.

A B C D

- Ans 1. A
2. B
3. D
4. C

Question ID : 4161331979
Status : Answered
Chosen Option : 2

Q.17 Disregarding the news about the impending bad weather, I decided to go without _____ and ended up getting wet.
Use the appropriate option to fill the blank.

- Ans 1. umbrella
2. the umbrella
3. an umbrella
4. a umbrella

Question ID : 4161331988
Status : Answered
Chosen Option : 2

Q.18 I said to the teacher, "Please explain this question to me."
Express this in reported speech.

- Ans 1. I requested the teacher to explain that question to me.
2. I asked the teacher to explain this question to me.
3. I told the teacher to explain the question to me.





Question ID : 4161331987
Status : Answered
Chosen Option : 1

 4.

I asked the teacher please explain this question to me.

Q.19 Select the appropriate verb.

Every one of his friends ____ rich.





- Ans  1. were
 2. are
 3. am
 4. is

Question ID : 4161331992

Status : Answered

Chosen Option : 4

Q.20 'Decision-making is a very vital part of our lives because what we are today is largely a result of the decisions that we took in the past.'
 This statement can be best understood as:





- Ans  1.
 Decisions are a reaction to every action taken in the past.
 2.
 If we cannot decide our past we cannot know our future.
 3.
 We cannot undo the past so we must live in the present.
 4.
 Whatever decisions we have taken in the past shape our present.

Question ID : 4161331991

Status : Answered

Chosen Option : 4

Q.21 Which of the following words is correctly spelt?





- Ans  1. calliberation
 2. callibration
 3. callebration
 4. calibration

Question ID : 4161331973

Status : Answered

Chosen Option : 1

Q.22 Use the correct synonym to complete the sentence.
 'Let me have a _____ word with you.'





- Ans  1. fast
 2. prompt
 3. quick
 4. swift

Question ID : 4161331989

Status : Answered

Chosen Option : 3

Q.23 'There is honour _____ thieves as well.'
 Choose the correct preposition for this popular saying.





- Ans  1. between
 2. about
 3. among
 4. for

Question ID : 4161331975

Status : Answered

Chosen Option : 3

Q.24 An entrepreneur must _____ of the market to be successful.
 Which expression can be used to complete this idiomatically?

- Ans  1. get the show on the road
 2. keep his finger on the pulse
 3. mean business
 4. burn his bridges

Question ID : 4161331986

Status : Answered

Chosen Option : 1

Comprehension:

Read the passage and answer the question that follows.

Primitive man was probably more concerned with fire as a source of warmth and as a means of cooking food rather than as a source of light. Before he discovered less laborious ways of making fire, he had to preserve it, and whenever he went on a journey he carried a firebrand with him. His discovery that the firebrand — from which the torch may very well have been developed — could be used for illumination was probably incidental to the primary purpose of preserving a flame.

Lamps, too, were probably developed by accident. Early man may have had his first conception of a lamp while watching a twig burning in the molten fat dropping from a roasting carcass. All he had to do was fashion a vessel to contain the fat and float a lighted reed in it. Such lamps, which were made of hollowed stones, bones or sea shells, have persisted in identical form up to quite recent times.

SubQuestion No : 25

Q.25 Another appropriate word for 'fashion' in this context would be:

- Ans
- 1. style
 - 2. make
 - 3. trend
 - 4. manner

Question ID : 4161331995

Status : Answered

Chosen Option : 2